


Summer Packet

Going into 2nd Grade



Daily Math & ELA Practice

Created by **MH** Ms. **Mai Huynh**

Credits

- "Let's Go Digital" Font
<http://www.fontspace.com/category/digital%20clock>
- "KG Fonts"
<http://www.kimberlygeswein.com/>
- "AP Print" Font
<http://www.teacherspayteachers.com/Store/Amanda-Pauley>
- "Bubbles and Dots" Cover Frame
<http://www.teacherspayteachers.com/Store/Katie-Dang>
- U.S. Coins Clip Art
www.teacherspayteachers.com/Store/A-Sketchy-Guy
- 3-D Shapes
<http://teacherspayteachers.com/Store/Marchena35>
- Martin Luther King, Jr. Clip Art
<http://www.teacherspayteachers.com/Store/Monster-Wrangler-Mike>
- Miscellaneous Clip Art
www.clker.com
www.mycutegraphics.com



Created by Ms. Mai Huynh


www.msmaihuynh.com

© 2016 Ms. Mai Huynh. All rights reserved. Purchase of this unit entitles the purchaser the right to reproduce the pages for a single classroom and for educational purposes only. Duplication for more than one classroom, an entire school, an entire school system, or commercial purposes is strictly forbidden without written permission from the publisher. Ms. Mai Huynh: msmaihuynh@gmail.com.

Copying **any** part of this product and placing it on the Internet in any form (even a personal/classroom website) is strictly forbidden and is a violation of the Digital Millennium Copyright Act (DMCA).

SUMMER PACKET




I'M GETTING READY FOR 2ND GRADE!



Name: _____


SUMMER PACKET

I'M GETTING READY FOR 2ND GRADE!






Name: _____

SUMMER PACKET



Name: _____

SUMMER PACKET

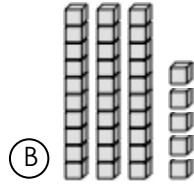



Name: _____

1 Write the missing numbers.

21, _____, 23, 24, 25, _____, 27

2 Which set shows 53?



3 $8 + 5 =$ _____

$10 + 9 =$ _____

$13 + 4 =$ _____

$6 + 3 =$ _____

4 Draw a line from the coin to its matching value.



•

• 10¢



•

• 1¢



•

• 5¢

5 If today is Wednesday, what day was it yesterday?

(A) Tuesday

(B) Thursday

6 Circle all the pictures that begin with *p*.



7 Mark the word that has the same beginning sound as *mouse*.

(A) make

(B) sand

(C) nose

8 Mark the sight word that completes the sentence.

The ___ clouds are high in the sky.

(A) funny

(B) white

(C) like

9 Mark the set of words that are in ABC order.


(A) bell, farm, water, table

(B) farm, table, water, bell

(C) bell, farm, table, water

10 Rewrite the sentence with correct capitalization, spelling, and punctuation.
it is time for shcool

1 Write the time.



2 8 tens, 7 ones = _____

6 tens, 2 ones = _____

3	$\begin{array}{r} 10 \\ - 6 \\ \hline \end{array}$	$\begin{array}{r} 8 \\ - 3 \\ \hline \end{array}$	$\begin{array}{r} 12 \\ - 9 \\ \hline \end{array}$
---	----------------------------------------------------	---------------------------------------------------	----------------------------------------------------

4 Draw a triangle.

5 Which group of tally marks shows 24?



6 Circle all the pictures that begin with *d*.



8 Mark the sight word that completes the sentence.

The kids _____ new books.

- (A) want (B) goes (C) went

7 Mark the word that has the same beginning sound as *chin*.

- (A) change (B) patch (C) cake

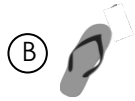
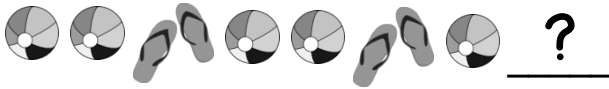
9 Write the words in ABC order.

goat	whale	monkey	bear
------	-------	--------	------

1. _____
2. _____
3. _____
4. _____

10 Rewrite the sentence with correct capitalization, spelling, and punctuation.
when are we going to the store.

1 What comes next?



2 Write >, < or = in the circle.



3 $6 + 9 =$ _____

$8 - 3 =$ _____

$10 + 4 =$ _____

$12 - 7 =$ _____

4 Which object is the longest?



5 There are 9 boys and 7 girls in the class. How many children are there all together in the class?

(A) $9 + 7 = 16$ children

(B) $9 + 7 = 15$ children

(C) $9 - 7 = 2$ children

6 Circle all the pictures that begin with *tr*.



8 Mark the sight word that completes the sentence.

_____ are you reading?

(A) Who

(B) Want

(C) What


7 Mark the word that has the same beginning sound as *lake*.

(A) kite

(B) sail

(C) laugh

9 The book is fiction.



(A) true

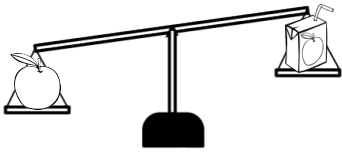
(B) false

10 Rewrite the sentence with correct capitalization, spelling, and punctuation.
Sam has soccer evry tuesday.

1 Find the pattern. Write the missing numbers.

6, 8, 10, _____, 14, _____, 18, 20

2 Which object weighs less?



- (A)
- (B)

3 $9 - 2 =$ _____

$7 + 5 =$ _____

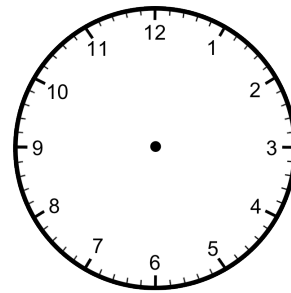
$8 - 7 =$ _____

$3 + 2 =$ _____

4 Write how much money in all.



5 Draw clock hands to show 3:00.



6 Circle all the pictures that begin with *wh*.



8 Mark the sight word that completes the sentence.

I watched the movie _____.

- (A) one
- (B) once
- (C) good

7 Mark the word that has the same beginning sound as *hop*.

- (A) pin
- (B) hand
- (C) pot

9 Mark the noun that completes the sentence.

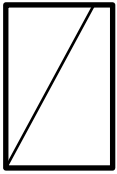
The _____ runs really fast.

- (A) house
- (B) pencil
- (C) girl

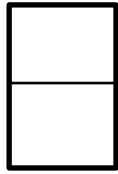
10 Rewrite the sentence with correct capitalization, spelling, and punctuation.

The bus takes matt to work?

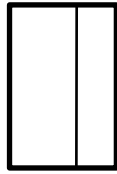
1 Which shape shows equal parts?



(A)



(B)



(C)


2 If tomorrow is Sunday, then today must be ____.

(A) Monday

(B) Saturday

<p>3</p> $\begin{array}{r} 11 \\ - 3 \\ \hline \end{array}$	$\begin{array}{r} 15 \\ - 9 \\ \hline \end{array}$	$\begin{array}{r} 7 \\ + 8 \\ \hline \end{array}$
-------------------------------------------------------------	----------------------------------------------------	---------------------------------------------------

4 Which real-life container holds the most liquid?



5 There are 13 ducks in the pond. If six ducks fly away, how many ducks are left in the pond?

$$\underline{\quad\quad} \bigcirc \underline{\quad\quad} = \underline{\quad\quad}$$

_____ ducks

Read the passage. Answer the questions.

Dogs for Pets

Dogs can make good pets if you take care of them. They need food and water. They need time to play and exercise. They also need a safe and clean place to live. Taking good care of a dog will make it a happy pet.

6 What is the main idea?

- (A) Dogs like to play.
- (B) Dogs need food and water.
- (C) Dogs need a lot of care.

7 What do dogs like to do?

- (A) play
- (B) run away
- (C) help clean

8 What do dogs need to live?

- (A) toys
- (B) food and water
- (C) a bed

9 Why do you need to take good care of your dog?

- (A) The dog will be happy.
- (B) The dog will never leave you.
- (C) The dog will always be good.

10 Which word belongs in the blank?

Dogs need ____ play.

- (A) time
- (B) go
- (C) to

1 Find the pattern. Write the missing numbers.

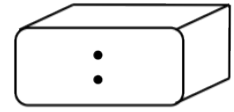

10, 15, _____, 25, _____, 35, 40

2 Tom has 4 shells, Angie has 7 shells, and Luis has 5 shells. How many shells do they have all together?

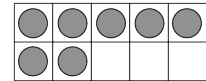
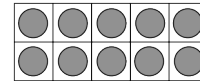
- (A) 11 shells
- (B) 16 shells

$\begin{array}{r} 12 \\ + 3 \\ \hline \end{array}$	$\begin{array}{r} 10 \\ + 10 \\ \hline \end{array}$	$\begin{array}{r} 13 \\ - 9 \\ \hline \end{array}$
----------------------------------------------------	-----------------------------------------------------	----------------------------------------------------

4 Write the time on the digital clock that the analog clock shows.



5 Write the number of counters the ten-frames show.



_____ counters

6 Circle all the pictures that end with *g*.



7 Mark the word that has the same ending sound as *rush*.

- (A) ship
- (B) hatch
- (C) dish

8 Mark the sight word that completes the sentence.

Do you _____ the way home?

- (A) walk
- (B) know
- (C) goes

9 What does an author do?

- (A) writes the words in books
- (B) draws the pictures in books
- (C) prints the pages in books

10 Rewrite the sentence with correct capitalization, spelling, and punctuation.
how many cakes do you need.

1 Write how much money in all.



2 Draw tally marks to show 17.

3 $2 + 4 + 1 =$ _____

$7 + 3 + 5 =$ _____

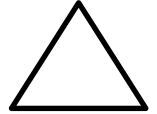
4 I have 4 sides. All of my sides are the same length. What shape am I?



(A)



(B)



(C)

5 What's the missing number?

+ 5 = 9

6 Circle all the pictures that end with *n*.



7 Mark the word that has the same ending sound as *note*.

(A) pat

(B) hope

(C) nice

8 Mark the sight word that completes the sentence.

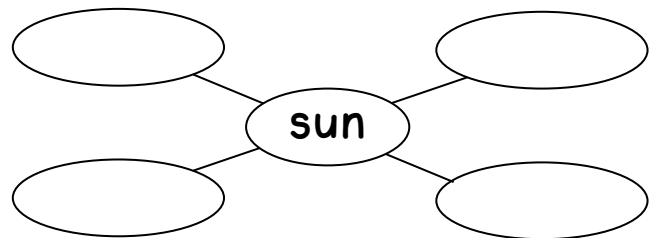
The boys are ___ there.

(A) over

(B) even

(C) other

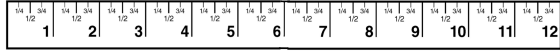
9 Write words that tell about the sun.




10 Rewrite the sentence with correct capitalization, spelling, and punctuation.

I can't here you

1 How many inches long is the phone?



2 Write >, <, or = in the circle.




3 $18 - 9 = \underline{\hspace{2cm}}$ $20 - 10 = \underline{\hspace{2cm}}$

4 Louisa sells 8 boxes of cookies. Matt sells 5 boxes of cookies. How many boxes of cookies do they sell in all?

Answer: _____

5 Draw a line to split the heart into two equal parts.



6 Circle all the pictures that end with *tch*.



8 Mark the sight word that completes the sentence.

The dogs barking all night.

- (A) where (B) were (C) can

7 Mark the word that has the same ending sound as *pick*.

- (A) dice (B) back (C) coat

9 Is the sentence below fiction or non-fiction?

The frog hops away from the pond.


- (A) fiction (B) non-fiction

10 Rewrite the sentence with correct capitalization, spelling, and punctuation.
what time is it

1 Micah goes to his piano lesson at 9:00. If his lesson is one hour long, what time will he be done?


- (A) 8:00
- (B) 9:30
- (C) 10:00

2 Skip count to find how many buttons in all.



3 $3 + 4 =$ _____ $9 + 5 =$ _____

4 Which object has the shape of a cube?



5 Which bottle holds the least?



6 Circle all the pictures that end with *th*.



8 Mark the sight word that completes the sentence.

Luis _____ to the park.

- (A) went
- (B) go
- (C) want

7 Mark the word that has the same ending sound as *happy*.

- (A) play
- (B) boy
- (C) sunny

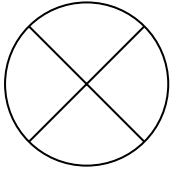
9 Mark the verb that completes the sentence.

The shark _____ in the ocean.

- (A) walks
- (B) swims
- (C) runs

10 Rewrite the sentence with correct capitalization, spelling, and punctuation.
my birthday is in august.

1 How many equal parts does the circle show?



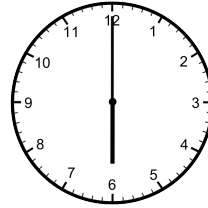
- (A) 2 (B) 3 (C) 4

2 Write how much money in all.

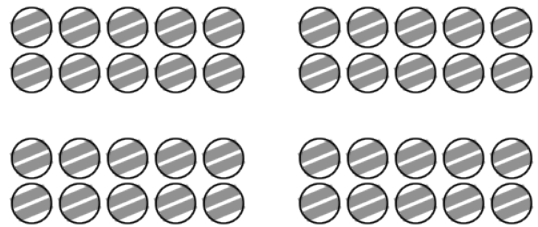


$\begin{array}{r} 11 \\ - 9 \\ \hline \end{array}$	$\begin{array}{r} 6 \\ + 7 \\ \hline \end{array}$	$\begin{array}{r} 17 \\ - 6 \\ \hline \end{array}$
----------------------------------------------------	---------------------------------------------------	----------------------------------------------------

4 Write the time.



5 How many marbles are there?



_____ marbles

Read the passage. Answer the questions.

Ted Bakes

Ted wants to make a cake for Mom while she is at work. He asks Dad to help. Ted and Dad wash their hands. Then they mix the cake. Last they bake the cake. Mom comes home and looks very surprised. Ted says, "We made it for you!" Ted feels great when Mom gives him a huge hug.

6 Where does the story take place?

- (A) in the morning
(B) at home
(C) at the park

7 How many characters are there?

- (A) one
(B) two
(C) three

8 What do Ted and Dad do first?

- (A) mix the cake
(B) bake the cake
(C) wash their hands


9 In what genre is this story?

- (A) realistic fiction
(B) fantasy
(C) informational text

10 What will Ted, Dad, and Mom most likely do next?

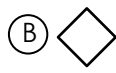
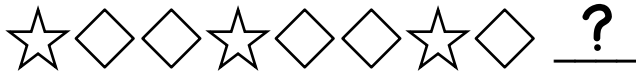
- (A) go to sleep
(B) play hide and seek
(C) eat the cake

1 How many blocks are there in all?



_____ blocks

2 Which shape comes next?



3 $15 + 2 =$ _____

$12 - 8 =$ _____

4 Use the graph to answer the questions.

Favorite Fruit						
	Apple					
	Banana					
	Orange					

Which fruit was the least popular?

How many people chose banana?

_____ people

5 Circle the odd number.

38

25

14

Look at the homophones. Mark the word that matches the picture.

6



(A) eight

(B) ate

7



(A) son

(B) sun

8 Mark the sight word that completes the sentence.

Will you ___ sit in your chair?

(A) they

(B) pretty

(C) please

9 The person that draws the pictures in a story is called the ___.

(A) author


(B) illustrator

(C) uncle

10 Rewrite the sentence with correct capitalization, spelling, and punctuation.

She can't see the board

1 Write the numbers in order from least to greatest.




2 Luke has 3 pens. He buys 7 more. How many pens does he have now?

Answer: _____

4	9	7
+ 4	+ 9	+ 7
_____	_____	_____

4 Leah reads eight books. Allen reads nine books. Draw the number of books each person reads.



Leah



Allen

Who reads fewer books? _____

5 Find the pattern. Write the missing numbers.

10, 20, _____, 40, _____, 60, 70

Look at the homophones. Mark the word that matches the picture.

6



- (A) male
- (B) mail

7




- (A) I
- (B) eye

8 Mark the sight word that completes the sentence.

___ child in our class gets to play.

- (A) Every
- (B) Ever
- (C) Very

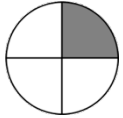
9 The book is fiction.



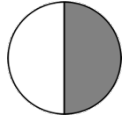
- (A) true
- (B) false

10 Rewrite the sentence with correct capitalization, spelling, and punctuation.
Emily play outside?

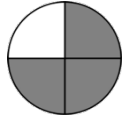
1 Which shape shows one-half shaded?



(A)



(B)



(C)

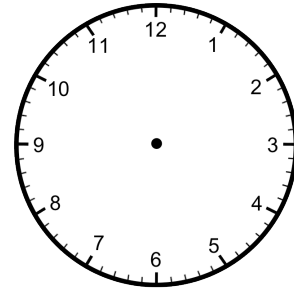
2 Write the number for each number word.

eighteen: _____ thirty: _____

twenty-two: _____ fifty-one: _____

3	$\begin{array}{r} 10 \\ - 5 \\ \hline \end{array}$	$\begin{array}{r} 9 \\ - 9 \\ \hline \end{array}$	$\begin{array}{r} 16 \\ - 8 \\ \hline \end{array}$
---	----------------------------------------------------	---------------------------------------------------	----------------------------------------------------

4 Draw the clock hands to show 1:30.



5 Asha has 3 nickels and 1 penny. How much money does she have in all?

Answer: _____

Look at the homophones. Mark the word that matches the picture.



- (A) meet
- (B) meat



- (A) deer
- (B) dear

8 Mark the sight word that completes the sentence.

Kenny is ___ Minnesota.

- (A) four
- (B) go
- (C) from

9 Write the words in ABC order.

pear apple grape orange

1. _____
2. _____
3. _____
4. _____

10 Rewrite the sentence with correct capitalization, spelling, and punctuation.
watch out four the car!

1 What's the missing number?

+ 6 = 12

2 My number is between 16 and 20. My number is even. What number am I?

3 $5 + 2 + 8 =$ _____

$6 + 9 + 4 =$ _____

4 Write the number of tally marks.



_____ tally marks

5 Draw a shape with zero sides.

Look at the homophones. Mark the word that matches the picture.

6



- (A) right
- (B) write

7



- (A) would
- (B) wood

8 Mark the sight word that completes the sentence.

We can't _____ the music.

- (A) here
- (B) her
- (C) hear

9 Mark the verb that completes the sentence.

The kite _____ high in the sky.

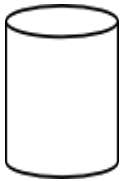
- (A) flies
- (B) blue
- (C) little

10 Rewrite the sentence with correct capitalization, spelling, and punctuation.
do you want to play.

1 Write >, <, or = in the circle.

3 + 5 ○ 5 + 3

2 Write the number of flat surfaces on a cylinder.



_____ flat surfaces

3 11 - 7 = _____ 9 + 8 = _____

4 - 4 = _____ 7 + 6 = _____

4 Write how much money in all.



5 Write a story problem for 7 - 5 = 2.

Read the passage. Answer the questions.

There are many kinds of farms. Some farms have cows. Many people drink the milk that cows make. Corn also comes from farms. Farmers plant the corn. Then they water the corn until it grows tall. Trucks take the milk and the corn to the stores.

6 What would be a good title?

- (A) Corn
- (B) Farms
- (C) Milk

7 Why do farms produce milk?

- (A) for people to drink
- (B) for fun
- (C) to give away for free

8 How does corn get to the stores?

- (A) farmers bring it
- (B) by truck
- (C) by airplane

9 What does the farmer have to do next after planting the corn?

- (A) nothing
- (B) bring it to the store
- (C) water it

10 What is the main idea?

- (A) Farmers are hard workers.
- (B) There are many kinds of farms.
- (C) Milk and corn go to the stores.

1 Which set repeats the pattern?



- (A) Triangle, Trapezoid, Circle
- (B) Circle, Triangle, Trapezoid
- (C) Trapezoid, Circle, Triangle

2 Equal means the ____.

- (A) most
- (B) least
- (C) same

3 $11 + 3 =$ _____ $10 - 7 =$ _____

4 About how long is this crayon?



- (A) 3 inches
- (B) 3 feet

5 What's the missing number?

- 4 = 6

Name each picture. Then write the compound word the two words make together.



_____ + _____ = _____



_____ + _____ = _____

8 Mark the sight word that completes the sentence.

You need to drink ____ water.

- (A) same
- (B) some
- (C) for

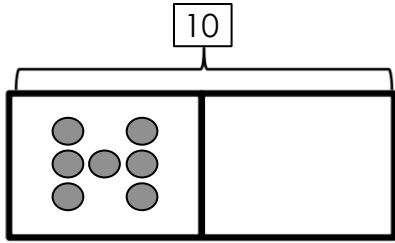
9 Mark the correctly spelled word to complete the sentence.

How ____ boys are in your class?

- (A) many
- (B) meny
- (C) mony

10 Rewrite the sentence with correct capitalization, spelling, and punctuation.
do yor Homework every night.

1 Draw the missing part of 10. Write the missing numbers.




part I know missing part

2 Write 10 more than 56: _____

3

$\begin{array}{r} 19 \\ - 1 \\ \hline \end{array}$	$\begin{array}{r} 8 \\ + 7 \\ \hline \end{array}$	$\begin{array}{r} 14 \\ + 3 \\ \hline \end{array}$
----------------------------------------------------	---------------------------------------------------	----------------------------------------------------

4 How many counters are there?



- (A) 29 (B) 54 (C) 60

5 Write how much money in all.



Name each picture. Then write the compound word the two words make together.



_____ + _____ = _____



_____ + _____ = _____

8 Mark the sight word that completes the sentence.

It _____ started raining.

- (A) just (B) have (C) will

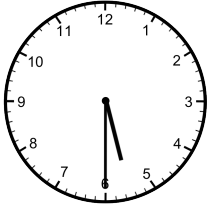
9 Read the list of words. Find the group where the list of words belongs.

pizza, apple, carrot, bread

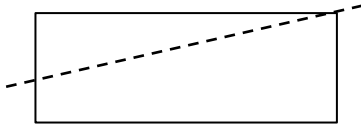
- (A) fruit (B) plants (C) food

10 Rewrite the sentence with correct capitalization, spelling, and punctuation.
is it raining outside

1 Write the time.



2 The line divides the rectangle into two equal parts.



(A) true

(B) false

3

20	12	9
- 0	- 2	+ 7
_____	_____	_____

4 Julian sees 23 birds. Calla sees 32 birds. Who sees more birds?

Answer: _____

5 Lisa has 7 stickers, Tyrone has 4 stickers, and Kayla 5 stickers. How many stickers do they have in all?

Answer: _____

Name each picture. Then write the compound word the two words make together.



_____ + _____ = _____



_____ + _____ = _____

8 Mark the sight word that completes the sentence.

Remember to ___ the umbrella.

- (A) talk (B) take (C) ride

9 Read the first part of the sentence. Mark the part that completes the sentence.

Let's go for ____.

- (A) bike ride home.
(B) a walk in the park.

10 Rewrite the sentence with correct capitalization, spelling, and punctuation.
She doesn't know how to play

1 Find the pattern. Write the missing numbers.

10, _____, 30, 40, 50, _____, 70, 80

2 Write an odd number less than 10.

3 $8 + 3 =$ _____

$7 + 5 =$ _____

$9 - 7 =$ _____

$6 - 4 =$ _____

4 Write how much money in all.



5 What's the name of the shape?



(A) rectangular prism

(B) cube

(C) cylinder

Name each picture. Then write the compound word the two words make together.



_____ + _____ = _____



_____ + _____ = _____

8 Mark the sight word that completes the sentence.

Pete is ___ new cat.

(A) our

(B) hour

(C) are

9 Mark the noun in the sentence.

The fish is swimming.


(A) The

(B) fish

(C) swimming

10 Rewrite the sentence with correct capitalization, spelling, and punctuation.
eat all of your Carrots.

1 Write the number of blocks as tens and ones.



_____ tens

_____ ones

2 Circle the smallest number.

87

46

78

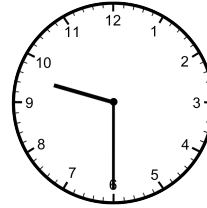
3

13
+ 3

11
- 4

8
+ 6

4 Which digital clock shows the same time as the analog clock?



- (A) 9:00
- (B) 9:30
- (C) 10:30

5 Adam has 12 pennies. He loses 5 of them. How many pennies does he have now?

Answer: _____

Read the passage. Answer the questions.

Annie's room was a disaster. There were toys on the floor, books on the bed and clothes on the desk. Her mom said, "Your room is a mess! You have to clean it now or you won't get to play." Annie spent two hours picking up her toys, books and clothes and putting them away. When Annie's mom came back, she smiled and said, "Your room looks much better!"

6 Who is the main character?

- (A) Annie
- (B) Mom
- (C) the bedroom

7 What is the setting?

- (A) the kitchen
- (B) at school
- (C) Annie's bedroom

8 What is Annie's problem?

- (A) Annie has a lot of homework.
- (B) Annie's room is too messy.
- (C) Annie's mom is too busy.

9 How does Annie fix the problem?

- (A) Annie's friend helps her.
- (B) Annie's mom cleans her room.
- (C) Annie puts her stuff away.

10 What is this story mostly about?

- (A) Annie cleans her room.
- (B) Annie puts her clothes away.
- (C) Annie's mom is mad.


1 Write the first month of the year on the line.

2 Write the numbers in order from greatest to least.

74 46 51

3 $4 + 9 + 5 =$ _____

4 Circle the heaviest real-life item.



5 You buy a dozen eggs. You use 4 of the eggs. How many eggs do you have left?

Answer: _____

6 Draw a line from each word to its synonym.

tidy •	• clean
kind •	• little
small •	• nice

7 Mark the correct punctuation for the sentence.

We take the bus to school _____

(A) . (B) ? (C) !

8 Mark the sight word that completes the sentence.

Kate _____ like to go for a walk.

(A) went (B) goes (C) would

9 Mark the sentence that is written with correct capitalization.

- (A) We went to the mall of America.
- (B) We went to the Mall of America.
- (C) we went to the Mall of America.

10 Rewrite the sentence with correct capitalization, spelling, and punctuation.

Stacy lives on Main street?

1 Write how much money in all.



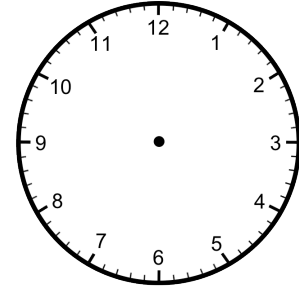
2 How many equal parts does the shape have?



_____ equal parts

3 $9 + 4 =$ _____ $15 - 7 =$ _____

4 Shane leaves for school at 7:30. It takes 30 minutes to get to school. Draw the clock hands to show the time Shane will get to school.



5 What's the missing number?

$$13 = \square + 6$$

6 Draw a line from each word to its synonym.

big •	• glad
happy •	• yell
shout •	• large

7 Mark the correct punctuation for the sentence.

What is the date today _____

- (A) . (B) ? (C) !

8 Mark the sight word that completes the sentence.

_____ are going on a field trip.

- (A) They (B) I (C) He

9 Mark the set of words that are in ABC order.

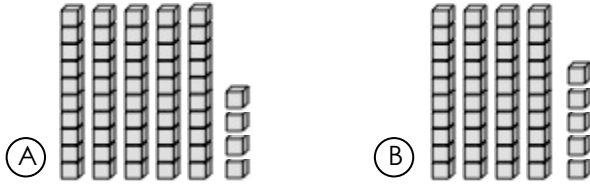
- (A) green, blue, red, yellow
 (B) blue, green, yellow, red
 (C) blue, green, red, yellow

10 Rewrite the sentence with correct capitalization, spelling, and punctuation.
como Zoo has lots of animals

1 An object that is divided into thirds has ___ equal parts.

- (A) 2 (B) 3 (C) 4

2 Which set shows less cubes?



3
$$\begin{array}{r} 14 \\ - 6 \\ \hline \end{array}$$

$$\begin{array}{r} 16 \\ + 4 \\ \hline \end{array}$$

$$\begin{array}{r} 17 \\ - 8 \\ \hline \end{array}$$

4 Find the pattern. Write the missing numbers.

31, _____, 29, _____, 27, 26, 25, 24

5 Belinda has 15¢. She spends 5¢ at the store. How much money does she have left?



6 Read the sentence. Mark the synonym for the underlined word.

The girls had a fantastic day.

- (A) bad (B) great (C) slow

7 Mark the correct punctuation for the sentence.

Hurray, we won the game ___

- (A) . (B) ? (C) !

8 Mark the sight word that completes the sentence.

Joe needs to ___ his bed.

- (A) eat (B) make (C) walk

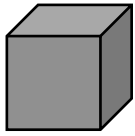
9 Mark the correctly spelled word to complete the sentence.

Do you ___ my pencil?

- (A) hav (B) have (C) hove

10 Rewrite the sentence with correct capitalization, spelling, and punctuation.
will you go with josh?

1 Write the number of flat surfaces and vertices for the solid figure.




_____ flat surfaces
 _____ vertices

2 Omar has 6 toy cars. Pang has 8 toy cars. How many more toy cars does Pang have than Omar?


Answer: _____

3 $8 - 5 =$ _____ $6 + 5 =$ _____

4 Jim sees 4 lions, 7 monkeys and 2 seals at the zoo. Fill in the bar graph to show the number of animals he sees.



5 Write >, <, or = in the circle.

1 inch  1 foot

6 Read the sentence. Mark the synonym for the underlined word.

Shut the door when you leave.

- (A) Open (B) Have (C) Close

7 Mark the correct punctuation for the sentence.

How tall is your dad _____

- (A) . (B) ? (C) !

8 Mark the sight word that completes the sentence.

Keira will _____ the dog a bone.

- (A) giving (B) take (C) give

9 Mark the verb in the sentence.

The bee finds its way back to the hive.


- (A) bee (B) finds (C) hive

10 Rewrite the sentence with correct capitalization, spelling, and punctuation.

Nat needs two cup

1 Gail has 4 dimes and 2 pennies in her pocket. How much money does she have in all?

2 Write the time.



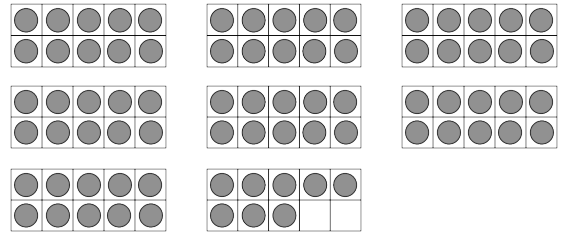
3

15
- 9

12
- 4

5
+ 6

4 How many counters do the ten-frames show?



_____ counters

circle one: odd even

5 Circle the seventh letter.

A B C D E F G H I J K

Read the passage. Answer the questions.

Frog Looks and Looks
Frog is sad because he lost his glasses. He looks under his bed. He looks in his desk. He looks everywhere but can't find them anywhere. Frog gets really tired and decides to go to bed. He goes to the bathroom to brush his teeth. He looks at himself in the mirror and laughs. His glasses are on top of his head!

6 Where does this story take place?

- (A) in the garden
- (B) in the classroom
- (C) in Frog's home

7 Why is Frog sad?

- (A) He can't find his glasses.
- (B) He reads a sad book.
- (C) He is really tired.

8 What does Frog do last?

- (A) brushes his teeth
- (B) looks under his bed
- (C) watches TV

9 Where does Frog find his glasses?

- (A) under his bed
- (B) in his desk
- (C) on top of his head

10 How do you know this story is fantasy?

- (A) The story is about a frog.
- (B) Frog brushes his teeth.
- (C) Frogs are animals.

1 Circle all the names for 9.

17 - 8 5 + 6 9 - 1 5 + 4

2 Finish the pattern.

1, 3, 7, 1, 3, 7, 1, _____, _____, _____

3	10
6	3
+ 8	+ 7
_____	_____

4 Which set shows 17¢?




5 Write 10 less than 49: _____

6 Draw a line from each word to its antonym.

young •	• cool
warm •	• over
under •	• old

7 Mark the word that goes with the picture.



- (A) apple
- (B) apples

8 Mark the sight word that completes the sentence.

_____ are we going for lunch?

- (A) Were
- (B) Went
- (C) Where

9 Mark the sentence that is written with correct capitalization.

- (A) School begins in September.
- (B) school begins in September.
- (C) School begins in september.

10 Rewrite the sentence with correct capitalization, spelling, and punctuation.
the Car is blue.

1 Chris picks 23 red apples and 9 green apples. How many apples does he pick in all?

Answer: _____

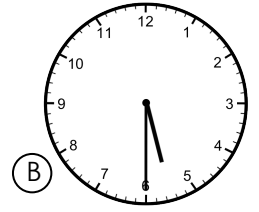
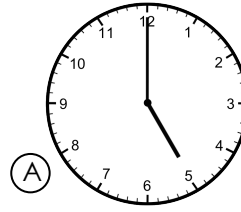
2 Write >, <, or = in the circle.

15 - 9 ○ 11 - 3

3 80 - 30 = _____ 50 - 20 = _____

30 + 10 = _____ 40 + 30 = _____

4 Jed goes for a run at 5:00. If he runs for 30 minutes, what time will he be done?



5 About how long is the line below?



- (A) an inch long
(B) shorter than an inch
(C) longer than an inch

6 Draw a line from each word to its antonym.

Word box containing: first • dirty, clean • last, wide • narrow

7 Mark the word that goes with the picture.



- (A) muffin
(B) muffins

8 Mark the sight word that completes the sentence.

The ___ of us will play together.

- (A) for (B) four (C) from

9 Who is the author of the book?




- (A) Back to School
(B) Tom Jones

10 Rewrite the sentence with correct capitalization, spelling, and punctuation.
The dogs barks at the cat

Blank lines for writing the corrected sentence

1 Mark the group the has $\frac{1}{4}$ shaded.



2 I more than 50 is _____.

I less than 50 is _____.

3	48 + 3 -----	57 + 10 -----	83 + 6 -----
---	--------------------	---------------------	--------------------

4 Each carton has 10 juice boxes. If you buy 6 cartons, how many juice boxes will you have?

Answer: _____

5 Find the pattern. Write the missing numbers.

30, 35, _____, 45, _____, 55, 60, 65

_____, 24, 26, 28, _____, 32, 34, 36

6 Read the sentence. Mark the antonym for the underlined word.

Talk to me before class.

- (A) while (B) after (C) in

7 Mark the word that goes with the picture.



- (A) leafs
(B) leaves

8 Mark the sight word that completes the sentence.

I can't _____ my backpack.

- (A) find (B) found (C) look

9 Choose the picture that tells the main idea of the story.



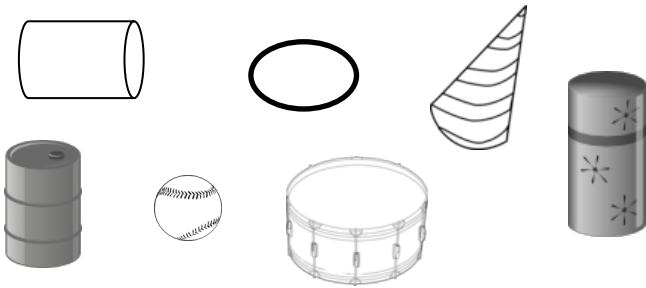
- (A) Skippy is a dog.
(B) Skippy is sitting by his doghouse.
(C) Skippy barks.

10 Rewrite the sentence with correct capitalization, spelling, and punctuation.
why are you crying

1 About how long is a hiccup?

- (A) one second
- (B) one minute
- (C) one hour

2 Circle all the cylinders.



3 $13 - 7 =$ _____ $20 - 2 =$ _____

4 Write how much money in all.



5 Edison bakes 14 cupcakes. His family eats 5 of them. How many cupcakes are left?

Answer: _____

6 Read the sentence. Mark the antonym for the underlined word.

The sky is getting dark.

- (A) light
- (B) black
- (C) good

7 Mark the word that goes with the picture.



- (A) spoon
- (B) spoons

8 Mark the sight word that completes the sentence.

My mom _____ to be careful.

- (A) say
- (B) sad
- (C) said

9 Mark the noun in the sentence.

The squirrels ran away.

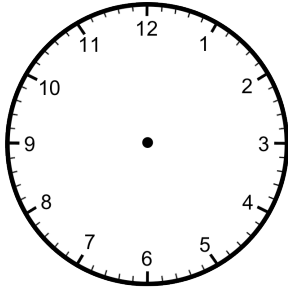
- (A) squirrels
- (B) away
- (C) ran

10 Rewrite the sentence with correct capitalization, spelling, and punctuation.
do you need help.

1 Circle all the even numbers.

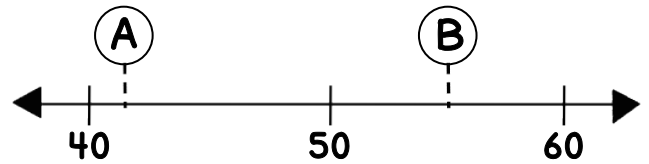
84 79 47 36 50

2 You eat lunch at noon. Draw the clock hands to show the time you eat lunch.



3 $9 + 4 =$ _____ $12 - 3 =$ _____

4



Circle the number that goes with each letter on the number line above.

A: 42 or 45

B: 51 or 55

5 What's the missing number?

$$11 - \square = 5$$

Read the passage. Answer the questions.

Roald Dahl

Roald Dahl wrote lots of fun stories for children. When he was in school, a company called "Cadbury" was nearby. Cadbury workers would often send sweets for the children to taste. This gave Roald Dahl the idea for his book, *Charlie and the Chocolate Factory*. This book is still a favorite among adults and children today.

6 What is the passage mostly about?

- (A) a chocolate factory
- (B) a man who wrote books
- (C) how to write books

7 What did Roald Dahl like to do?

- (A) write books
- (B) eat chocolate
- (C) draw pictures

8 What kind of genre is this passage?

- (A) fantasy
- (B) informational text
- (C) realistic fiction

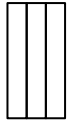
9 Why is *Charlie and the Chocolate Factory* a favorite book today?

- (A) It's all about chocolate.
- (B) It's about Roald Dahl's life.
- (C) It's a fun story.

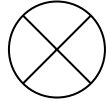
10 Why was this passage written?

- (A) to make you laugh
- (B) to help you write your own book
- (C) to teach you facts

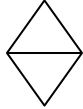
1 Which shape is divided into 3 equal parts?



(A)



(B)



(C)

2 Draw tally marks to show 24.

3
$$\begin{array}{r} 26 \\ + 3 \\ \hline \end{array}$$

$$\begin{array}{r} 13 \\ + 10 \\ \hline \end{array}$$

$$\begin{array}{r} 48 \\ + 8 \\ \hline \end{array}$$

4 Write the fact family for 4, 5, 9.

_____ + _____ = _____

_____ + _____ = _____

_____ - _____ = _____

_____ - _____ = _____

5 Preston has 2 fewer stamps than Remy. If Remy has 8 stamps, how many stamps does Preston have?

Answer: _____

6 Draw a line to match the words that rhyme.

bike •	• path
day •	• like
math •	• weigh

7 Mark the group of words that is a complete sentence.

- (A) Buying chocolate.
- (B) She is buying chocolate.
- (C) Is buying chocolate.

8 Mark the sight word that completes the sentence.

Give the candy to ____ .

- (A) them
- (B) then
- (C) they

9 Sequence the events by numbering the boxes with 1, 2 and 3.



10 Rewrite the sentence with correct capitalization, spelling, and punctuation.

Ellen liks to eat pizza

1 Mark the group of numbers that is in order from least to greatest.

- (A) 57 75 70
- (B) 75 70 57
- (C) 57 70 75

2 10 more than 67 is _____.

10 less than 67 is _____.

3

$\begin{array}{r} 16 \\ - 3 \\ \hline \end{array}$	$\begin{array}{r} 50 \\ + 20 \\ \hline \end{array}$	$\begin{array}{r} 4 \\ + 9 \\ \hline \end{array}$
----------------------------------------------------	-----------------------------------------------------	---------------------------------------------------

4 Write how much money in all.



5 Use >, <, or = to fill in each circle.

$47 \bigcirc 57$	$78 \bigcirc 69$
$23 \bigcirc 23$	$34 \bigcirc 43$

6 Draw a line to match the words that rhyme.

seen •	• shop
tent •	• bent
top •	• mean

7 Mark the group of words that is a complete sentence.

- (A) Look out for!
- (B) Out for the car!
- (C) Look out for the car!

8 Mark the sight word that completes the sentence.

Charlie _____ the golden ticket.

- (A) find
- (B) found
- (C) have

9 What is the title of the book?



- (A) Summer Fun
- (B) Nora Thomas

10 Rewrite the sentence with correct capitalization, spelling, and punctuation.
listen to your parents?

1 What is the chance that you will pick a marble?



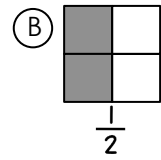
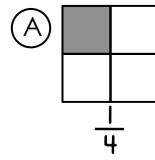
- (A) certain
- (B) likely
- (C) unlikely

2 Dinner starts at 6:00. It takes one hour. What time does dinner end?

- (A) 6:30
- (B) 7:00
- (C) 8:00

3 $8 + 3 =$ _____ $10 - 6 =$ _____

4 Which shaded fraction is more?



5 Ricky has 3 more rocks than Fumi. If Fumi has 10 rocks, how many rocks does Ricky have?

Answer: _____

6 Write two words that rhyme with the given word.



cat

7 Mark the group of words that is a complete sentence.

- (A) Did you see the turtle?
- (B) The turtle?
- (C) You see the?

8 Mark the sight word that completes the sentence.

I will need to ___ about it.

- (A) thank
- (B) think
- (C) then

9 Mark the correctly spelled word to complete the sentence.

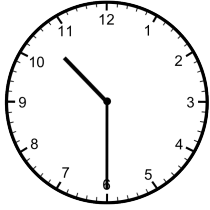
Our team was in ___ place.

- (A) ferst
- (B) first
- (C) furst


10 Rewrite the sentence with correct capitalization, spelling, and punctuation.

I play the piano every friday

1 Write the time.



2 Write the number of dots.



_____ dots

3 $17 - 9 =$ _____ $8 + 7 =$ _____

Use the calendar to answer #4 and #5.

April

Sun	Mon	Tues	Wed	Thur	Fri	Sat
			1	2	3	4
5	6	7	8	9	10	11
12	13	14	15	16	17	18
19	20	21	22	23	24	25
26	27	28	29	30		

4 How many days are there in April?

5 What day is the first of the month?

6 Write two words that rhyme with the given word.



jar

7 Mark the group of words that is a complete sentence.

- (A) Is reading a scary book.
- (B) A scary book.
- (C) Pat is reading a scary book.

8 Mark the sight word that completes the sentence.

The children ___ a spider at home.

- (A) saw
- (B) was
- (C) say

9 Mark the adjective that completes the sentence.

The dog has ___ fur.

- (A) hair
- (B) they
- (C) soft

10 Rewrite the sentence with correct capitalization, spelling, and punctuation.

Donna is going to california?

1 Write how much money in all.



2 Travis has 13 stickers and Tessa has 7 stickers. How many more stickers does Travis have than Tessa?

Answer: _____

3

12	27	8
- 8	+ 4	+ 6
_____	_____	_____

Use the graph to answer #4 and #5.

Favorite Sport						
Tennis						
Football						
Soccer						

4 How many people chose soccer?

5 Which sport is the most popular?

Read the passage. Answer the questions.

Rabbit is fast and Turtle is slow. One day, Rabbit says to Turtle, "You will never beat me in a race!" Turtle doesn't think he can win, but he decides to try. During the race, Rabbit is so far ahead of Turtle, he decides to take a nap. While he is sleeping, Turtle slips past him and wins the race. Turtle is glad he didn't give up. Turtle can't wait for Rabbit to wake up!

6 How many characters are there?

- (A) one
- (B) two
- (C) three

7 Why doesn't Turtle think he'll win?

- (A) He is fast.
- (B) He is slow.
- (C) He doesn't know how to run.

8 What mistake does Rabbit make?

- (A) He falls asleep.
- (B) He trips and falls.
- (C) He lets Turtle win.

9 How do you know this story could not really happen?

- (A) Turtle and Rabbit are outside.
- (B) Rabbit falls asleep.
- (C) Rabbit and Turtle talk.


10 How will Rabbit mostly likely feel when he wakes up?

- (A) giggly
- (B) surprised
- (C) scared

1 About how long does it take to play a basketball game?

- (A) 1 minute (B) 1 hour (C) 1 day

2 Write the number of blocks as tens and ones.

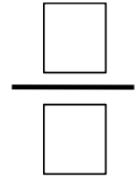
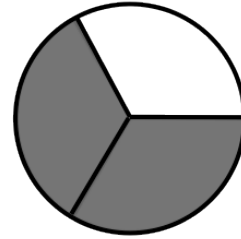


_____ tens

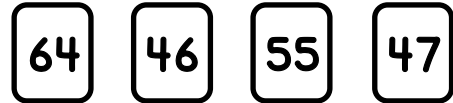
_____ ones

3 $\begin{array}{r} 23 \\ + 7 \\ \hline \end{array}$	16 $\begin{array}{r} 16 \\ - 7 \\ \hline \end{array}$	38 $\begin{array}{r} 38 \\ + 5 \\ \hline \end{array}$
---------------------------------------------------------	----------------------------------------------------------	----------------------------------------------------------

4 Write the fraction for the shaded part of the shape.



5 Write the numbers in order from least to greatest.



6 Draw a line to match the two words to its contraction.

were not •	• I'm
I am •	• they're
they are •	• weren't

7 Find the group where the list of words belongs.

fall, winter, spring, summer


- (A) rain (B) weather (C) seasons

8 Mark the sight word that completes the sentence.

The birds _____ south in the winter.

- (A) flies (B) fly (C) walk

9 Sequence the events by numbering the boxes with 1, 2 and 3.



10 Rewrite the sentence with correct capitalization, spelling, and punctuation.
it is sunny at the beach

1 Andy sees 6 black birds, 8 red birds, and 4 gray birds at the park. How many birds does he see in all?

Answer: _____

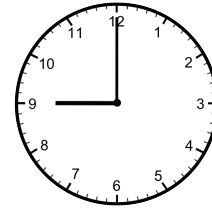
2 Find the pattern. Write the missing numbers.

50, 55, 60, _____, 70, 75, 80, _____

3 $4 + 7 + 6 =$ _____

$8 + 3 + 5 =$ _____

4 Write the time.



5 Write how much money in all.



6 Draw a line to match the two words to its contraction.

she is •	• won't
we have •	• she's
will not •	• we've

7 Find the group where the list of words belongs.

red, brown, white, yellow

- (A) colors
- (B) pens
- (C) food

8 Mark the sight word that completes the sentence.

When _____ we leaving for school?

- (A) is
- (B) will
- (C) are

9 Mark the sentence that is written with correct capitalization.

- (A) I'm going with jim to the park.
- (B) I'm going with Jim to the park.
- (C) I'm going with Jim to the Park.

10 Rewrite the sentence with correct capitalization, spelling, and punctuation.
andy clean his room.

1 Shade half of the rectangle below.



2 Find the pattern. Write the missing numbers.


82, _____, 86, 88, _____, 92, 94

15	11	12
- 9	- 7	+ 4
_____	_____	_____

4 Write >, <, or = in the circle.

2 + 5 + 6 ○ 9 + 1 + 2

5 Mark the heavier object.



6 Read the sentence. Mark the contraction for the underlined words.

You are going with your father.

- (A) Your
- (B) Your'e
- (C) You're

7 Read the list of words. Mark the word that belongs with the list of words.

plane, truck, boat, train

- (A) car
- (B) shoes
- (C) house

8 Mark the sight word that completes the sentence.

___ many students are there?

- (A) Who
- (B) How
- (C) What

9 Mark the correctly spelled word to complete the sentence.


What ___ Evan need to do?

- (A) deos
- (B) does
- (C) dose

10 Rewrite the sentence with correct capitalization, spelling, and punctuation.
may I go with u?

1 Draw an odd number of balloons.

4 Shade $\frac{2}{3}$ of the circle.



2 Missy has 1 dime and 3 nickels in her pocket. How much money does she have in all?

Answer: _____

5 Olivia picks 22 daisies and 16 roses from the garden. How many flowers does she pick in all?

Answer: _____

3

61	25	36
- 8	- 7	+ 5
_____	_____	_____

6 Read the sentence. Mark the contraction for the underlined words.

Do not touch the hot stove!

- (A) Don't (B) Do'nt (C) Dont'

8 Mark the sight word that completes the sentence.

The ___ rabbit hops in the yard.

- (A) blue (B) little (C) very

7 Read the list of words. Mark the word that belongs with the list of words.

hat, sweater, jeans, boots

- (A) blanket (B) socks (C) juice

9 Mark the adjective in the sentence.

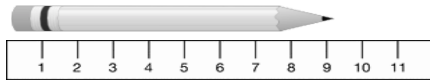
The dinosaur has sharp teeth.

- (A) teeth (B) dinosaur (C) sharp

10 Rewrite the sentence with correct capitalization, spelling, and punctuation.

Jerry sleeps inn his tent

1 How many centimeters long is the pencil?



_____ centimeters

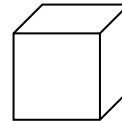
2 Angie is 24, Blake is 32 and Brian is 23. Write their names from oldest to youngest.

3	$\begin{array}{r} 34 \\ + 15 \\ \hline \end{array}$	$\begin{array}{r} 52 \\ + 23 \\ \hline \end{array}$	$\begin{array}{r} 20 \\ + 8 \\ \hline \end{array}$
---	-----------------------------------------------------	-----------------------------------------------------	----------------------------------------------------

4 Write how much money in all.



5 How many vertices does a cube have?



_____ vertices

Read the passage. Answer the questions.

Hockey is Tough

Hockey is a game you play on an ice rink with a team. Hockey is a hard sport to play. You skate on the ice while trying to get a small black puck in the net using a special kind of stick. Hockey can be very dangerous if you are not careful. Players must wear a helmet and pads to protect their bodies.

- 6 What is the main idea?
- (A) why everyone should ice skate
 - (B) why hockey is the best sport
 - (C) why hockey is a hard sport
- 7 What item don't you need to play?
- (A) skates
 - (B) a ball
 - (C) a net

- 8 Why do players wear helmets?
- (A) to keep their hair in place
 - (B) to protect their heads
 - (C) to see better

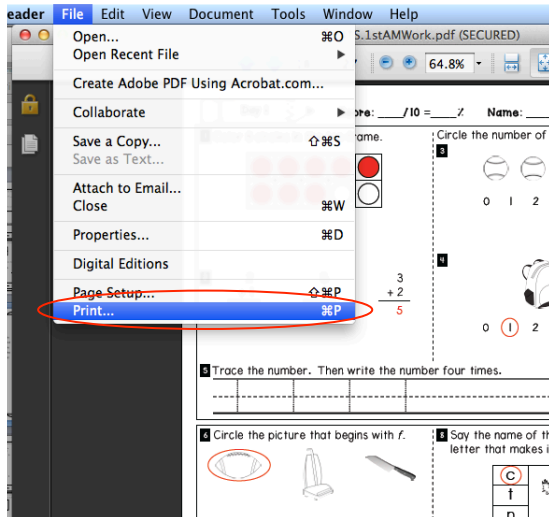
- 9 Why was this passage written?
- (A) to inform
 - (B) to make people play hockey
 - (C) to make people laugh

- 10 What's another good title for this passage?
- (A) Hockey is for Everyone
 - (B) Hockey is a Sport
 - (C) Hockey is Challenging

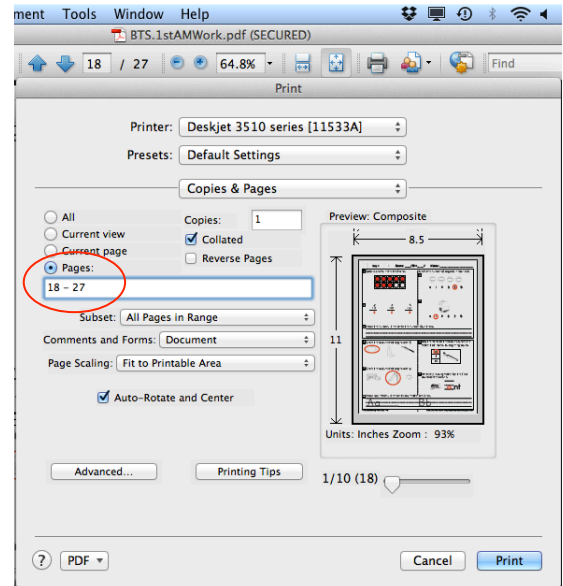
SAVE PAPER

By printing 4 pages of the answer key on one sheet!

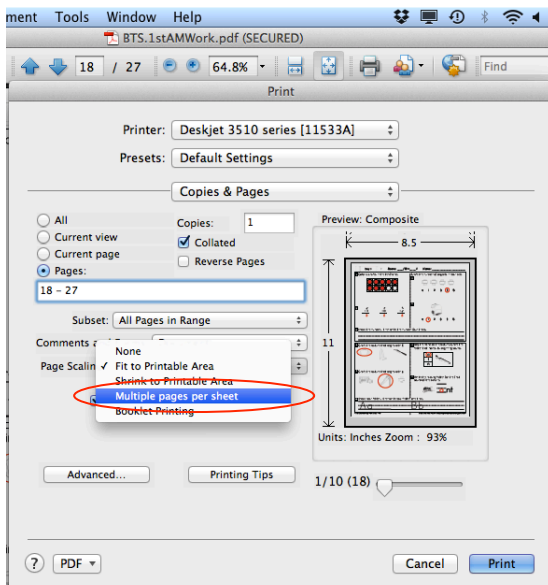
1. File → Print



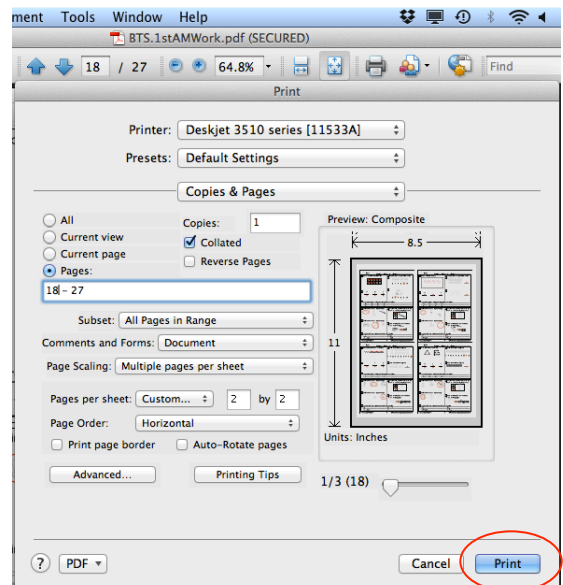
2. Select "Pages" and type the pages to be printed 4-to-a-page.



3. Select "Multiple pages per sheet."




4. Preview should show 4-to-a-page. Select "Print."



1 Write the missing numbers.

21, 22, 23, 24, 25, 26, 27

2 Which set shows 53?



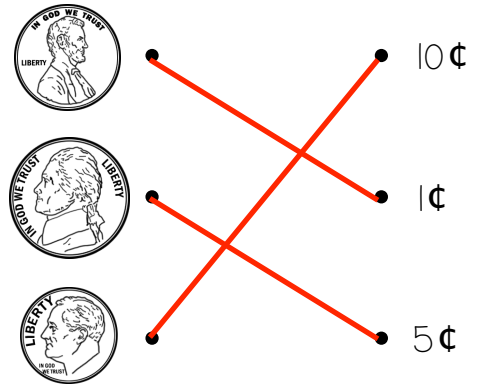
3 $8 + 5 = \underline{13}$

$10 + 9 = \underline{19}$

$13 + 4 = \underline{17}$

$6 + 3 = \underline{9}$

4 Draw a line from the coin to its matching value.



5 If today is Wednesday, what day was it yesterday?

- (A) Tuesday
- (B) Thursday

6 Circle all the pictures that begin with *p*.



7 Mark the word that has the same beginning sound as *mouse*.

- (A) make
- (B) sand
- (C) nose

8 Mark the sight word that completes the sentence.

The ___ clouds are high in the sky.

- (A) funny
- (B) white
- (C) like

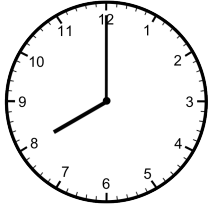
9 Mark the set of words that are in ABC order.

- (A) bell, farm, water, table
- (B) farm, table, water, bell
- (C) bell, farm, table, water

10 Rewrite the sentence with correct capitalization, spelling, and punctuation.
it is time for shcool

It is time for school.

1 Write the time.



8:00

2 8 tens, 7 ones = 87

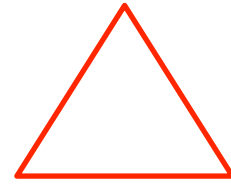
6 tens, 2 ones = 62

$$\begin{array}{r} 10 \\ -6 \\ \hline 4 \end{array}$$

$$\begin{array}{r} 8 \\ -3 \\ \hline 5 \end{array}$$

$$\begin{array}{r} 12 \\ -9 \\ \hline 3 \end{array}$$

4 Draw a triangle.



5 Which group of tally marks shows 24?



6 Circle all the pictures that begin with *d*.



8 Mark the sight word that completes the sentence.

The kids ___ new books.

- (A) want (B) goes (C) went

7 Mark the word that has the same beginning sound as *chin*.

- (A) change (B) patch (C) cake

9 Write the words in ABC order.

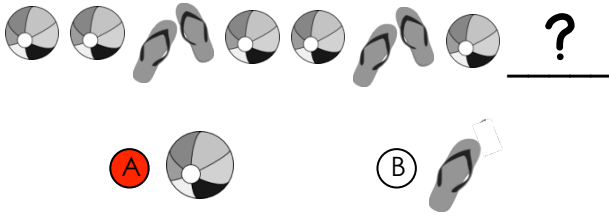
goat whale monkey bear

- bear
- goat
- monkey
- whale

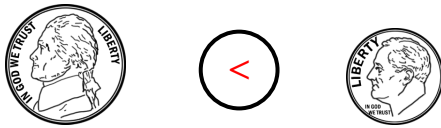
10 Rewrite the sentence with correct capitalization, spelling, and punctuation.
when are we going to the store.

When are we going to the store?

1 What comes next?



2 Write >, < or = in the circle.



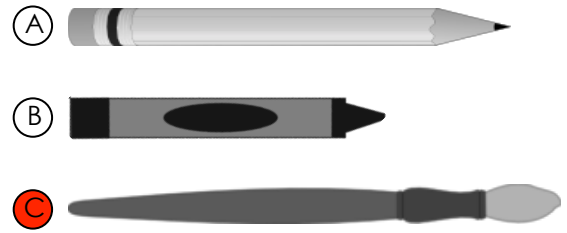
3 $6 + 9 = 15$

$8 - 3 = 5$

$10 + 4 = 14$

$12 - 7 = 5$

4 Which object is the longest?



5 There are 9 boys and 7 girls in the class. How many children are there all together in the class?

- A $9 + 7 = 16$ children
- B $9 + 7 = 15$ children
- C $9 - 7 = 2$ children

6 Circle all the pictures that begin with *tr*.



8 Mark the sight word that completes the sentence.

_____ are you reading?

- A Who
- B Want
- C What

7 Mark the word that has the same beginning sound as *lake*.

- A kite
- B sail
- C laugh

9 The book is fiction.



- A true
- B false

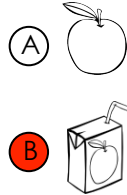
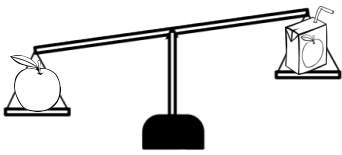
10 Rewrite the sentence with correct capitalization, spelling, and punctuation.
Sam has soccer evry tuesday.

Sam has soccer every Tuesday.

1 Find the pattern. Write the missing numbers.

6, 8, 10, 12, 14, 16, 18, 20

2 Which object weighs less?



3 $9 - 2 = \underline{7}$

$7 + 5 = \underline{12}$

$8 - 7 = \underline{1}$

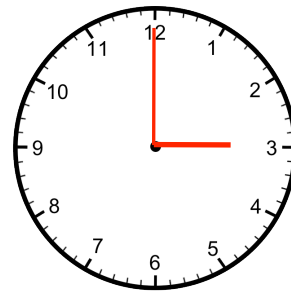
$3 + 2 = \underline{5}$

4 Write how much money in all.




12¢

5 Draw clock hands to show 3:00.



6 Circle all the pictures that begin with *wh*.



8 Mark the sight word that completes the sentence.

I watched the movie ____.

- (A) one (B) once (C) good

7 Mark the word that has the same beginning sound as *hop*.

- (A) pin (B) hand (C) pot

9 Mark the noun that completes the sentence.

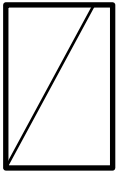
The ____ runs really fast.

- (A) house (B) pencil (C) girl

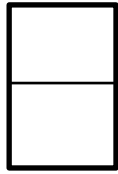
10 Rewrite the sentence with correct capitalization, spelling, and punctuation.
The bus takes matt to work?

The bus takes Matt to work.

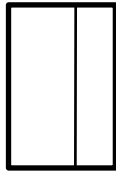
1 Which shape shows equal parts?



(A)



(B)



(C)

2 If tomorrow is Sunday, then today must be ____.

(A) Monday

(B) Saturday


3

11
- 3
8

15
- 9
6

7
+ 8
15

4 Which real-life container holds the most liquid?



5 There are 13 ducks in the pond. If six ducks fly away, how many ducks are left in the pond?

$$\underline{13} - \underline{6} = \underline{7}$$

7 ducks

Read the passage. Answer the questions.

Dogs for Pets

Dogs can make good pets if you take care of them. They need food and water. They need time to play and exercise. They also need a safe and clean place to live. Taking good care of a dog will make it a happy pet.

6 What is the main idea?

(A) Dogs like to play.

(B) Dogs need food and water.

(C) Dogs need a lot of care.

7 What do dogs like to do?

(A) play

(B) run away

(C) help clean

8 What do dogs need to live?

(A) toys

(B) food and water

(C) a bed

9 Why do you need to take good care of your dog?

(A) The dog will be happy.

(B) The dog will never leave you.

(C) The dog will always be good.

10 Which word belongs in the blank?

Dogs need ____ play.

(A) time

(B) go

(C) to

1 Find the pattern. Write the missing numbers.

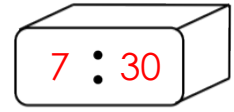

10, 15, 20, 25, 30, 35, 40

2 Tom has 4 shells, Angie has 7 shells, and Luis has 5 shells. How many shells do they have all together?

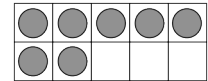
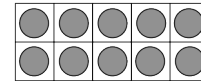
- (A) 11 shells (B) 16 shells

$\begin{array}{r} 12 \\ + 3 \\ \hline 15 \end{array}$	$\begin{array}{r} 10 \\ + 10 \\ \hline 20 \end{array}$	$\begin{array}{r} 13 \\ - 9 \\ \hline 4 \end{array}$
-------------------------------------------------------	--------------------------------------------------------	------------------------------------------------------

4 Write the time on the digital clock that the analog clock shows.

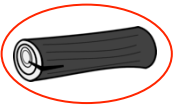


5 Write the number of counters the ten-frames show.



17 counters

6 Circle all the pictures that end with *g*.



7 Mark the word that has the same ending sound as *rush*.

- (A) ship (B) hatch (C) dish

8 Mark the sight word that completes the sentence.

Do you the way home?

- (A) walk (B) know (C) goes

9 What does an author do?

- (A) writes the words in books
 (B) draws the pictures in books
 (C) prints the pages in books

10 Rewrite the sentence with correct capitalization, spelling, and punctuation.
how many cakes do you need.

How many cakes do you need?

1 Write how much money in all.



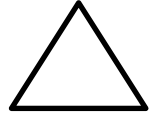
2 Draw tally marks to show 17.



3 $2 + 4 + 1 = \underline{7}$

$7 + 3 + 5 = \underline{15}$

4 I have 4 sides. All of my sides are the same length. What shape am I?



5 What's the missing number?

$$\boxed{4} + 5 = 9$$

6 Circle all the pictures that end with *n*.



8 Mark the sight word that completes the sentence.

The boys are ___ there.

(A) over

(B) even

(C) other

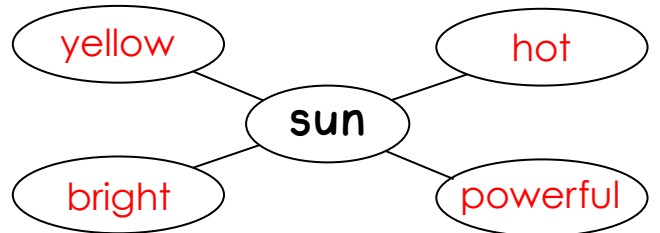
7 Mark the word that has the same ending sound as *note*.

(A) pat

(B) hope

(C) nice

9 Write words that tell about the sun.



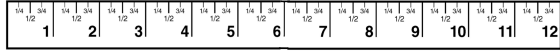
Answers will vary.

10 Rewrite the sentence with correct capitalization, spelling, and punctuation.

I can't here you

I can't hear you.

1 How many inches long is the phone?



7 inches

2 Write >, <, or = in the circle.

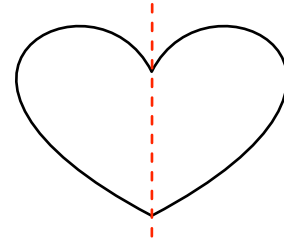
87 > 78

3 $18 - 9 = 9$ $20 - 10 = 10$

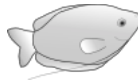
4 Louisa sells 8 boxes of cookies. Matt sells 5 boxes of cookies. How many boxes of cookies do they sell in all?

Answer: 13 boxes

5 Draw a line to split the heart into two equal parts.



6 Circle all the pictures that end with *tch*.



8 Mark the sight word that completes the sentence.

The dogs ___ barking all night.

- (A) where (B) were (C) can

7 Mark the word that has the same ending sound as *pick*.

- (A) dice (B) back (C) coat

9 Is the sentence below fiction or non-fiction?

The frog hops away from the pond.

- (A) fiction (B) non-fiction


10 Rewrite the sentence with correct capitalization, spelling, and punctuation.
what time is it

What time is it?

1 Micah goes to his piano lesson at 9:00. If his lesson is one hour long, what time will he be done?

- (A) 8:00
- (B) 9:30
- (C) 10:00


2 Skip count to find how many buttons in all.



12 buttons

3 $3 + 4 = \underline{7}$ $9 + 5 = \underline{14}$

4 Which object has the shape of a cube?



5 Which bottle holds the least?



6 Circle all the pictures that end with *th*.



8 Mark the sight word that completes the sentence.

Luis _____ to the park.

- (A) went
- (B) go
- (C) want

7 Mark the word that has the same ending sound as *happy*.

- (A) play
- (B) boy
- (C) sunny

9 Mark the verb that completes the sentence.

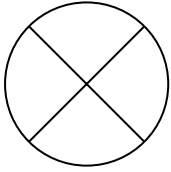
The shark _____ in the ocean.

- (A) walks
- (B) swims
- (C) runs

10 Rewrite the sentence with correct capitalization, spelling, and punctuation.
my birthday is in august.

My birthday is in August.

1 How many equal parts does the circle show?



- (A) 2 (B) 3 (C) 4

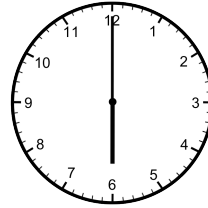
2 Write how much money in all.



15¢

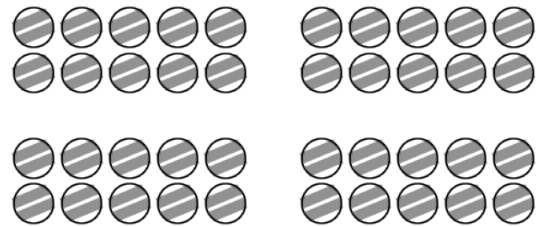
$\begin{array}{r} 11 \\ - 9 \\ \hline 2 \end{array}$	$\begin{array}{r} 6 \\ + 7 \\ \hline 13 \end{array}$	$\begin{array}{r} 17 \\ - 6 \\ \hline 11 \end{array}$
------------------------------------------------------	------------------------------------------------------	-------------------------------------------------------

4 Write the time.



6:00

5 How many marbles are there?



40 marbles

Read the passage. Answer the questions.

Ted Bakes

Ted wants to make a cake for Mom while she is at work. He asks Dad to help. Ted and Dad wash their hands. Then they mix the cake. Last they bake the cake. Mom comes home and looks very surprised. Ted says, "We made it for you!" Ted feels great when Mom gives him a huge hug.

6 Where does the story take place?

- (A) in the morning
 (B) at home
 (C) at the park

7 How many characters are there?

- (A) one
 (B) two
 (C) three

8 What do Ted and Dad do first?

- (A) mix the cake
 (B) bake the cake
 (C) wash their hands

9 In what genre is this story?

- (A) realistic fiction
 (B) fantasy
 (C) informational text

10 What will Ted, Dad, and Mom most likely do next?

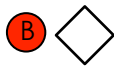
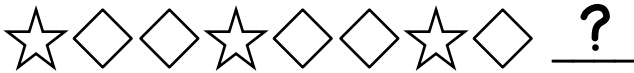
- (A) go to sleep
 (B) play hide and seek
 (C) eat the cake

1 How many blocks are there in all?



76 blocks

2 Which shape comes next?



3 $15 + 2 =$ 17

$12 - 8 =$ 4

4 Use the graph to answer the questions.

Favorite Fruit						
	Apple					
	Banana					
	Orange					

Which fruit was the least popular?

orange

How many people chose banana?

5 people

5 Circle the odd number.

38

25

14

Look at the homophones. Mark the word that matches the picture.

6



(A) eight

(B) ate

7



(A) son

(B) sun

8 Mark the sight word that completes the sentence.

Will you sit in your chair?

(A) they

(B) pretty

(C) please

9 The person that draws the pictures in a story is called the .

(A) author

(B) illustrator

(C) uncle

10 Rewrite the sentence with correct capitalization, spelling, and punctuation.

She can't see the board

She can't see the board.

1 Write the numbers in order from least to greatest.



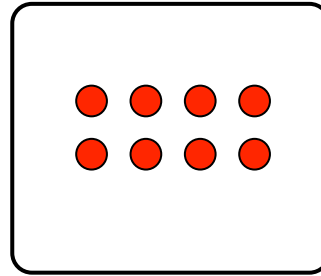
3 8 10

2 Luke has 3 pens. He buys 7 more. How many pens does he have now?

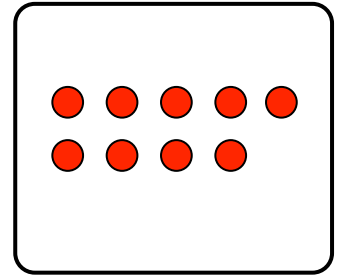
Answer: 10 pens

4 + 4 ----- 8	9 + 9 ----- 18	7 + 7 ----- 14
------------------------	-------------------------	-------------------------

4 Leah reads eight books. Allen reads nine books. Draw the number of books each person reads.



Leah



Allen

Who reads fewer books? Leah

5 Find the pattern. Write the missing numbers.

10, 20, 30, 40, 50, 60, 70

Look at the homophones. Mark the word that matches the picture.

6



- (A) male
- (B) mail

7




- (A) I
- (B) eye

8 Mark the sight word that completes the sentence.

_____ child in our class gets to play.

- (A) Every
- (B) Ever
- (C) Very

9 The book is fiction.

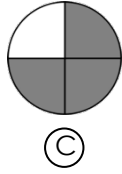
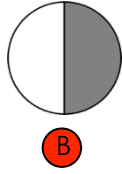
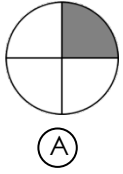


- (A) true
- (B) false

10 Rewrite the sentence with correct capitalization, spelling, and punctuation.
Emily play outside?

Emily plays outside.

1 Which shape shows one-half shaded?



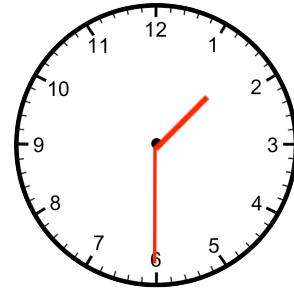
2 Write the number for each number word.

eighteen: 18 thirty: 30

twenty-two: 22 fifty-one: 51

$\begin{array}{r} 10 \\ - 5 \\ \hline 5 \end{array}$	$\begin{array}{r} 9 \\ - 9 \\ \hline 0 \end{array}$	$\begin{array}{r} 16 \\ - 8 \\ \hline 8 \end{array}$
------------------------------------------------------	-----------------------------------------------------	------------------------------------------------------

4 Draw the clock hands to show 1:30.



5 Asha has 3 nickels and 1 penny. How much money does she have in all?

Answer: 16¢

Look at the homophones. Mark the word that matches the picture.



- (A) meet
- (B) meat



- (A) deer
- (B) dear

8 Mark the sight word that completes the sentence.

Kenny is Minnesota.

- (A) four
- (B) go
- (C) from

9 Write the words in ABC order.

pear apple grape orange

1. apple
2. grape
3. orange
4. pear

10 Rewrite the sentence with correct capitalization, spelling, and punctuation.
watch out four the car!

Watch out for the car!

1 What's the missing number?

$\boxed{6} + 6 = 12$

2 My number is between 16 and 20. My number is even. What number am I?

18

3 $5 + 2 + 8 = \underline{15}$


$6 + 9 + 4 = \underline{19}$

4 Write the number of tally marks.



37 tally marks

5 Draw a shape with zero sides.




Look at the homophones. Mark the word that matches the picture.

6



- (A) right
- (B) write

7



- (A) would
- (B) wood

8 Mark the sight word that completes the sentence.

We can't _____ the music.

- (A) here
- (B) her
- (C) hear

9 Mark the verb that completes the sentence.

The kite _____ high in the sky.

- (A) flies
- (B) blue
- (C) little

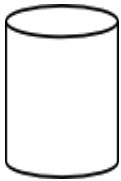
10 Rewrite the sentence with correct capitalization, spelling, and punctuation.
do you want to play.

Do you want to play?

1 Write >, <, or = in the circle.

3 + 5 **(=)** 5 + 3

2 Write the number of flat surfaces on a cylinder.



2 flat surfaces

3 $11 - 7 = \underline{4}$

$9 + 8 = \underline{17}$

$4 - 4 = \underline{0}$

$7 + 6 = \underline{13}$

4 Write how much money in all.



25¢

5 Write a story problem for $7 - 5 = 2$.

Answers will vary.

Read the passage. Answer the questions.

There are many kinds of farms. Some farms have cows. Many people drink the milk that cows make. Corn also comes from farms. Farmers plant the corn. Then they water the corn until it grows tall. Trucks take the milk and the corn to the stores.

6 What would be a good title?

- (A) Corn
- (B) Farms**
- (C) Milk

7 Why do farms produce milk?

- (A) for people to drink**
- (B) for fun
- (C) to give away for free

8 How does corn get to the stores?

- (A) farmers bring it**
- (B) by truck
- (C) by airplane

9 What does the farmer have to do next after planting the corn?

- (A) nothing
- (B) bring it to the store
- (C) water it**

10 What is the main idea?

- (A) Farmers are hard workers.
- (B) There are many kinds of farms.**
- (C) Milk and corn go to the stores.

1 Which set repeats the pattern?



2 Equal means the ____.

- (A) most (B) least (C) same

3 $11 + 3 = \underline{14}$ $10 - 7 = \underline{3}$

4 About how long is this crayon?



- (A) 3 inches
(B) 3 feet

5 What's the missing number?

$\boxed{10} - 4 = 6$

Name each picture. Then write the compound word the two words make together.



pan + cake = pancake



rain + coat = raincoat

8 Mark the sight word that completes the sentence.

You need to drink ____ water.

- (A) same (B) some (C) for

9 Mark the correctly spelled word to complete the sentence.

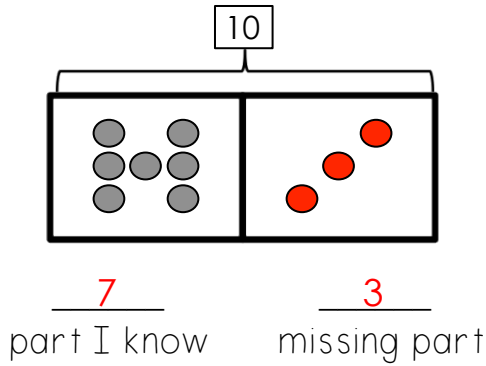
How ____ boys are in your class?

- (A) many (B) meny (C) mony

10 Rewrite the sentence with correct capitalization, spelling, and punctuation.
do yor Homework every night.

Do your homework every night.


1 Draw the missing part of 10. Write the missing numbers.



2 Write 10 more than 56: 66

$\begin{array}{r} 19 \\ - 1 \\ \hline 18 \end{array}$	$\begin{array}{r} 8 \\ + 7 \\ \hline 15 \end{array}$	$\begin{array}{r} 14 \\ + 3 \\ \hline 17 \end{array}$
-------------------------------------------------------	------------------------------------------------------	-------------------------------------------------------

4 How many counters are there?



- (A) 29 (B) 54 (C) 60

5 Write how much money in all.



60¢

Name each picture. Then write the compound word the two words make together.

6

sun + glasses = sunglasses

7

foot + ball = football

8 Mark the sight word that completes the sentence.

It started raining.

- (A) just (B) have (C) will

9 Read the list of words. Find the group where the list of words belongs.

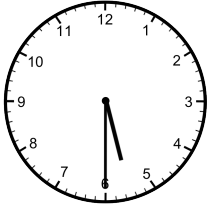
pizza, apple, carrot, bread

- (A) fruit (B) plants (C) food

10 Rewrite the sentence with correct capitalization, spelling, and punctuation.
is it raining outside

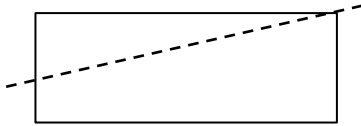
Is it raining outside?

1 Write the time.



5:30

2 The line divides the rectangle into two equal parts.



(A) true

(B) false

3	$\begin{array}{r} 20 \\ - 0 \\ \hline 20 \end{array}$	$\begin{array}{r} 12 \\ - 2 \\ \hline 10 \end{array}$	$\begin{array}{r} 9 \\ + 7 \\ \hline 16 \end{array}$
---	-------------------------------------------------------	-------------------------------------------------------	------------------------------------------------------

4 Julian sees 23 birds. Calla sees 32 birds. Who sees more birds?

Answer: Calla

5 Lisa has 7 stickers, Tyrone has 4 stickers, and Kayla 5 stickers. How many stickers do they have in all?

Answer: 16 stickers

Name each picture. Then write the compound word the two words make together.



brain + storm = brainstorm



bed + time = bedtime

8 Mark the sight word that completes the sentence.

Remember to ___ the umbrella.

- (A) talk
- (B) take
- (C) ride

9 Read the first part of the sentence. Mark the part that completes the sentence.

Let's go for ___.

- (A) bike ride home.
- (B) a walk in the park.

10 Rewrite the sentence with correct capitalization, spelling, and punctuation.
She doesn't know how to play

She doesn't know how to play.

1 Find the pattern. Write the missing numbers.

10, 20, 30, 40, 50, 60, 70, 80

2 Write an odd number less than 10.

1, 3, 5, 7, or 9

Answers will vary.

3 $8 + 3 = \underline{11}$

$7 + 5 = \underline{12}$

$9 - 7 = \underline{2}$

$6 - 4 = \underline{2}$

4 Write how much money in all.



26¢

5 What's the name of the shape?



A rectangular prism

B cube

C cylinder

Name each picture. Then write the compound word the two words make together.



mail + box = mailbox



snow + ball = snowball

8 Mark the sight word that completes the sentence.

Pete is new cat.

A our

B hour

C are

9 Mark the noun in the sentence.

The fish is swimming.

A The


B fish

C swimming

10 Rewrite the sentence with correct capitalization, spelling, and punctuation.
eat all of your Carrots.

Eat all of your carrots.

- 1 Write the number of blocks as tens and ones.



9 tens

2 ones

- 2 Circle the smallest number.

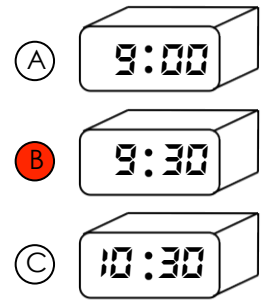
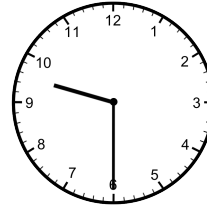
87

46

78

$\begin{array}{r} 13 \\ + 3 \\ \hline 16 \end{array}$	$\begin{array}{r} 11 \\ - 4 \\ \hline 7 \end{array}$	$\begin{array}{r} 8 \\ + 6 \\ \hline 14 \end{array}$
-------------------------------------------------------	------------------------------------------------------	------------------------------------------------------

- 4 Which digital clock shows the same time as the analog clock?



- 5 Adam has 12 pennies. He loses 5 of them. How many pennies does he have now?

Answer: 7 pennies

Read the passage. Answer the questions.

Annie's room was a disaster. There were toys on the floor, books on the bed and clothes on the desk. Her mom said, "Your room is a mess! You have to clean it now or you won't get to play." Annie spent two hours picking up her toys, books and clothes and putting them away. When Annie's mom came back, she smiled and said, "Your room looks much better!"

- 6 Who is the main character?

- (A) Annie
- (B) Mom
- (C) the bedroom

- 7 What is the setting?

- (A) the kitchen
- (B) at school
- (C) Annie's bedroom

- 8 What is Annie's problem?

- (A) Annie has a lot of homework.
- (B) Annie's room is too messy.
- (C) Annie's mom is too busy.

- 9 How does Annie fix the problem?

- (A) Annie's friend helps her.
- (B) Annie's mom cleans her room.
- (C) Annie puts her stuff away.

- 10 What is this story mostly about?

- (A) Annie cleans her room.
- (B) Annie puts her clothes away.
- (C) Annie's mom is mad.

1 Write the first month of the year on the line.

January



2 Write the numbers in order from greatest to least.

74 46 51

74 51 46

3 $4 + 9 + 5 = 18$

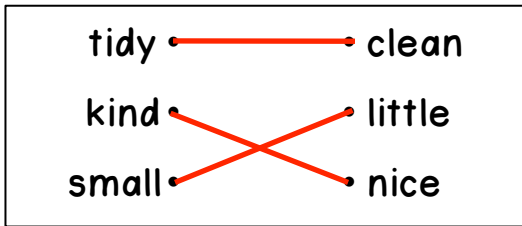
4 Circle the heaviest real-life item.



5 You buy a dozen eggs. You use 4 of the eggs. How many eggs do you have left?

Answer: 8 eggs

6 Draw a line from each word to its synonym.



7 Mark the correct punctuation for the sentence.

We take the bus to school ____

(A) . (B) ? (C) !

8 Mark the sight word that completes the sentence.

Kate ____ like to go for a walk.

(A) went (B) goes (C) would

9 Mark the sentence that is written with correct capitalization.

- (A) We went to the mall of America.
- (B) We went to the Mall of America.
- (C) we went to the Mall of America.

10 Rewrite the sentence with correct capitalization, spelling, and punctuation.
Stacy lives on Main street?

Stacy lives on Main Street.

1 Write how much money in all.



8¢

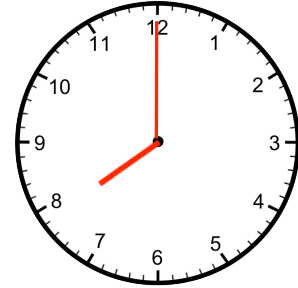
2 How many equal parts does the shape have?



3 equal parts

3 $9 + 4 = \underline{13}$ $15 - 7 = \underline{8}$

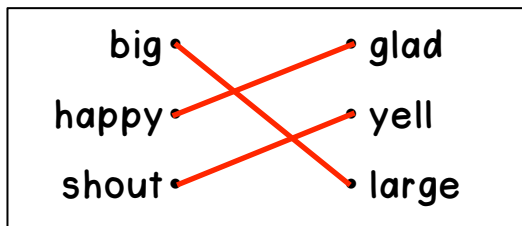
4 Shane leaves for school at 7:30. It takes 30 minutes to get to school. Draw the clock hands to show the time Shane will get to school.



5 What's the missing number?

$$13 = \boxed{7} + 6$$

6 Draw a line from each word to its synonym.



7 Mark the correct punctuation for the sentence.

What is the date today _____

(A) . (B) ? (C) !

8 Mark the sight word that completes the sentence.

_____ are going on a field trip.

(A) They (B) I (C) He

9 Mark the set of words that are in ABC order.

- (A) green, blue, red, yellow
 (B) blue, green, yellow, red
 (C) blue, green, red, yellow

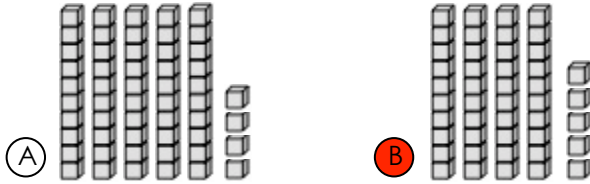
10 Rewrite the sentence with correct capitalization, spelling, and punctuation.
 como Zoo has lots of animals

Como Zoo has lots of animals.

1 An object that is divided into thirds has ___ equal parts.

- (A) 2 (B) 3 (C) 4

2 Which set shows less cubes?



3
$$\begin{array}{r} 14 \\ - 6 \\ \hline 8 \end{array}$$

$$\begin{array}{r} 16 \\ + 4 \\ \hline 20 \end{array}$$

$$\begin{array}{r} 17 \\ - 8 \\ \hline 9 \end{array}$$

4 Find the pattern. Write the missing numbers.

31, 30, 29, 28, 27, 26, 25, 24

5 Belinda has 15¢. She spends 5¢ at the store. How much money does she have left?



6 Read the sentence. Mark the synonym for the underlined word.

The girls had a fantastic day.

- (A) bad (B) great (C) slow

7 Mark the correct punctuation for the sentence.

Hurray, we won the game ___

- (A) . (B) ? (C) !

8 Mark the sight word that completes the sentence.

Joe needs to ___ his bed.

- (A) eat (B) make (C) walk

9 Mark the correctly spelled word to complete the sentence.

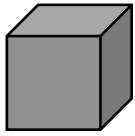
Do you ___ my pencil?

- (A) hav (B) have (C) hove

10 Rewrite the sentence with correct capitalization, spelling, and punctuation.
will you go with josh?

Will you go with Josh?

1 Write the number of flat surfaces and vertices for the solid figure.



6 flat surfaces

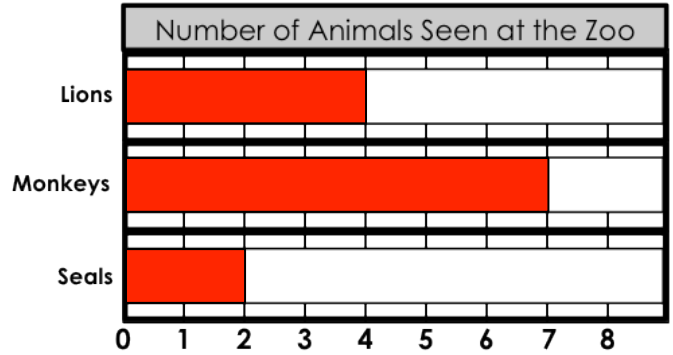
8 vertices

2 Omar has 6 toy cars. Pang has 8 toy cars. How many more toy cars does Pang have than Omar?

Answer: 2 more toy cars

3 $8 - 5 = \underline{3}$ $6 + 5 = \underline{11}$

4 Jim sees 4 lions, 7 monkeys and 2 seals at the zoo. Fill in the bar graph to show the number of animals he sees.



5 Write >, <, or = in the circle.

1 inch 1 foot

6 Read the sentence. Mark the synonym for the underlined word.

Shut the door when you leave.

- (A) Open
 (B) Have
 (C) Close

7 Mark the correct punctuation for the sentence.

How tall is your dad ____

- (A) .
 (B) ?
 (C) !

8 Mark the sight word that completes the sentence.

Keira will ____ the dog a bone.

- (A) giving
 (B) take
 (C) give

9 Mark the verb in the sentence.

The bee finds its way back to the hive.

- (A) bee
 (B) finds
 (C) hive

10 Rewrite the sentence with correct capitalization, spelling, and punctuation.


Nat needs two cup

Nat needs two cups.

- 1 Gail has 4 dimes and 2 pennies in her pocket. How much money does she have in all?

42¢

- 2 Write the time.



4:00

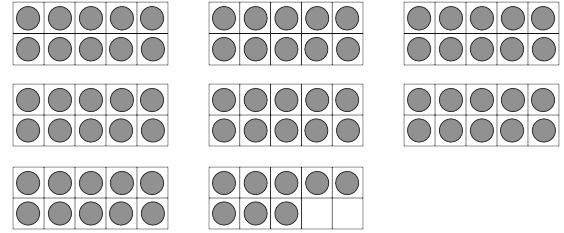
3

$$\begin{array}{r} 15 \\ - 9 \\ \hline 6 \end{array}$$

$$\begin{array}{r} 12 \\ - 4 \\ \hline 8 \end{array}$$

$$\begin{array}{r} 5 \\ + 6 \\ \hline 11 \end{array}$$

- 4 How many counters do the ten-frames show?



78 counters

circle one: odd **even**

- 5 Circle the seventh letter.

A B C D E F **G** H I J K

Read the passage. Answer the questions.

Frog Looks and Looks

Frog is sad because he lost his glasses. He looks under his bed. He looks in his desk. He looks everywhere but can't find them anywhere. Frog gets really tired and decides to go to bed. He goes to the bathroom to brush his teeth. He looks at himself in the mirror and laughs. His glasses are on top of his head!

- 6 Where does this story take place?

- (A) in the garden
(B) in the classroom
(C) in Frog's home

- 7 Why is Frog sad?

- (A) He can't find his glasses.
(B) He reads a sad book.
(C) He is really tired.

- 8 What does Frog do last?

- (A) brushes his teeth
(B) looks under his bed
(C) watches TV

- 9 Where does Frog find his glasses?

- (A) under his bed
(B) in his desk
(C) on top of his head

- 10 How do you know this story is fantasy?

- (A) The story is about a frog.
(B) Frog brushes his teeth.
(C) Frogs are animals.

1 Circle all the names for 9.

$17 - 8$ $5 + 6$ $9 - 1$ $5 + 4$

2 Finish the pattern.

1, 3, 7, 1, 3, 7, 1, 3, 7, 1

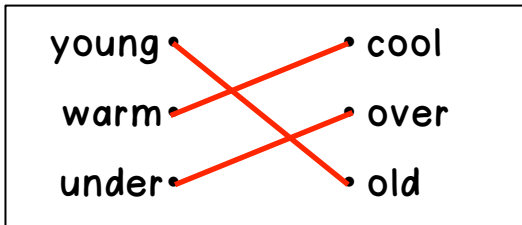
$\begin{array}{r} 3 \\ 6 \\ + 8 \\ \hline 17 \end{array}$	$\begin{array}{r} 10 \\ 3 \\ + 7 \\ \hline 20 \end{array}$
-----------------------------------------------------------	------------------------------------------------------------

4 Which set shows 17¢?



5 Write 10 less than 49: 39

6 Draw a line from each word to its antonym.



7 Mark the word that goes with the picture.



- (A) apple
- (B) apples

8 Mark the sight word that completes the sentence.

_____ are we going for lunch?

- (A) Were (B) Went (C) Where

9 Mark the sentence that is written with correct capitalization.

- (A) School begins in September.
- (B) school begins in September.
- (C) School begins in september.

10 Rewrite the sentence with correct capitalization, spelling, and punctuation.
the Car is blue.

The car is blue.

1 Chris picks 23 red apples and 9 green apples. How many apples does he pick in all?

Answer: 32 apples

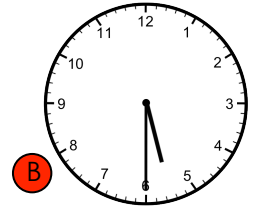
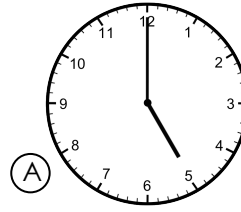
2 Write >, <, or = in the circle.

15 - 9 < 11 - 3

3 $80 - 30 = \underline{50}$ $50 - 20 = \underline{30}$

$30 + 10 = \underline{40}$ $40 + 30 = \underline{70}$

4 Jed goes for a run at 5:00. If he runs for 30 minutes, what time will he be done?



5 About how long is the line below?



- (A) an inch long
- (B) shorter than an inch
- (C) longer than an inch

6 Draw a line from each word to its antonym.

first	dirty
clean	last
wide	narrow

(Note: Lines connect 'first' to 'last', 'clean' to 'dirty', and 'wide' to 'narrow')

7 Mark the word that goes with the picture.



- (A) muffin
- (B) muffins

8 Mark the sight word that completes the sentence.

The ___ of us will play together.

- (A) for
- (B) four
- (C) from

9 Who is the author of the book?




- (A) Back to School
- (B) Tom Jones

10 Rewrite the sentence with correct capitalization, spelling, and punctuation.
The dogs barks at the cat

The dogs bark at the cat.

1 Mark the group the has $\frac{1}{4}$ shaded.



2 I more than 50 is 51.

I less than 50 is 49.

3

$\begin{array}{r} 48 \\ + 3 \\ \hline 51 \end{array}$	$\begin{array}{r} 57 \\ + 10 \\ \hline 67 \end{array}$	$\begin{array}{r} 83 \\ + 6 \\ \hline 99 \end{array}$
-------------------------------------------------------	--------------------------------------------------------	-------------------------------------------------------

4 Each carton has 10 juice boxes. If you buy 6 cartons, how many juice boxes will you have?

Answer: 60 juice boxes

5 Find the pattern. Write the missing numbers.

30, 35, 40, 45, 50, 55, 60, 65

22, 24, 26, 28, 30, 32, 34, 36

6 Read the sentence. Mark the antonym for the underlined word.

Talk to me before class.

- (A) while (B) after (C) in

7 Mark the word that goes with the picture.



- (A) leafs (B) leaves

8 Mark the sight word that completes the sentence.

I can't my backpack.

- (A) find (B) found (C) look

9 Choose the picture that tells the main idea of the story.



- (A) Skippy is a dog.
 (B) Skippy is sitting by his doghouse.
 (C) Skippy barks.

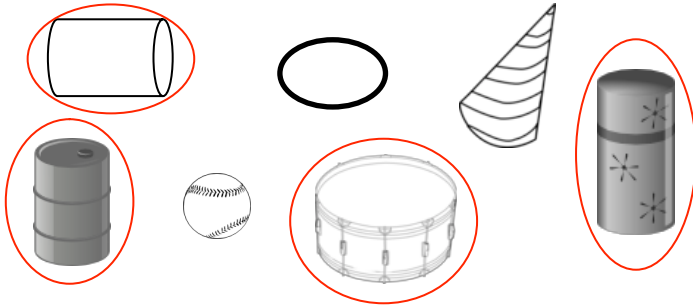
10 Rewrite the sentence with correct capitalization, spelling, and punctuation.
why are you crying

Why are you crying?

1 About how long is a hiccup?

- A one second
- B one minute
- C one hour

2 Circle all the cylinders.



3 $13 - 7 = \underline{6}$ $20 - 2 = \underline{18}$

4 Write how much money in all.



28¢

5 Edison bakes 14 cupcakes. His family eats 5 of them. How many cupcakes are left?

Answer: 9 cupcakes

6 Read the sentence. Mark the antonym for the underlined word.

The sky is getting dark.

- A light
- B black
- C good

7 Mark the word that goes with the picture.



- A spoon
- B spoons

8 Mark the sight word that completes the sentence.

My mom to be careful.

- A say
- B sad
- C said

9 Mark the noun in the sentence.

The squirrels ran away.

- A squirrels
- B away
- C ran

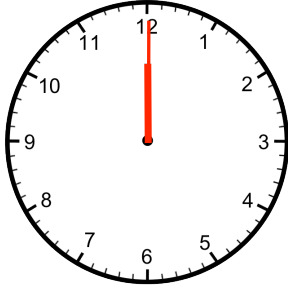
10 Rewrite the sentence with correct capitalization, spelling, and punctuation.
do you need help.

Do you need help?

1 Circle all the even numbers.

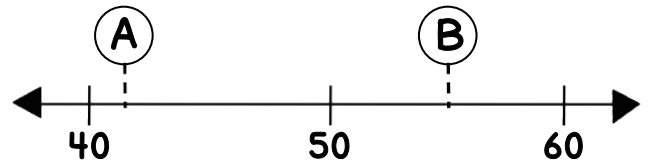
84 79 47 36 50

2 You eat lunch at noon. Draw the clock hands to show the time you eat lunch.



3 $9 + 4 = 13$ $12 - 3 = 9$

4



Circle the number that goes with each letter on the number line above.

A: 42 or 45

B: 51 or 55

5 What's the missing number?

$$11 - \boxed{6} = 5$$

Read the passage. Answer the questions.

Roald Dahl

Roald Dahl wrote lots of fun stories for children. When he was in school, a company called "Cadbury" was nearby. Cadbury workers would often send sweets for the children to taste. This gave Roald Dahl the idea for his book, *Charlie and the Chocolate Factory*. This book is still a favorite among adults and children today.

6 What is the passage mostly about?

- (A) a chocolate factory
- (B) a man who wrote books
- (C) how to write books

7 What did Roald Dahl like to do?

- (A) write books
- (B) eat chocolate
- (C) draw pictures

8 What kind of genre is this passage?

- (A) fantasy
- (B) informational text
- (C) realistic fiction

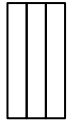
9 Why is *Charlie and the Chocolate Factory* a favorite book today?

- (A) It's all about chocolate.
- (B) It's about Roald Dahl's life.
- (C) It's a fun story.

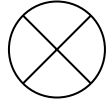
10 Why was this passage written?

- (A) to make you laugh
- (B) to help you write your own book
- (C) to teach you facts

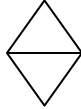
1 Which shape is divided into 3 equal parts?



A



B



C

2 Draw tally marks to show 24.



3	$\begin{array}{r} 26 \\ + 3 \\ \hline 29 \end{array}$	$\begin{array}{r} 13 \\ + 10 \\ \hline 23 \end{array}$	$\begin{array}{r} 48 \\ + 8 \\ \hline 56 \end{array}$
---	-------------------------------------------------------	--------------------------------------------------------	-------------------------------------------------------

4 Write the fact family for 4, 5, 9.

$$\underline{4} + \underline{5} = \underline{9}$$

$$\underline{5} + \underline{4} = \underline{9}$$

$$\underline{9} - \underline{5} = \underline{4}$$

$$\underline{9} - \underline{4} = \underline{5}$$

5 Preston has 2 fewer stamps than Remy. If Remy has 8 stamps, how many stamps does Preston have?

Answer: 6 stamps

6 Draw a line to match the words that rhyme.

bike	path
day	like
math	weigh

(Red lines connect 'bike' to 'like', 'day' to 'weigh', and 'math' to 'path')

7 Mark the group of words that is a complete sentence.

- A Buying chocolate.
- B She is buying chocolate.
- C Is buying chocolate.

8 Mark the sight word that completes the sentence.

Give the candy to ____ .

- A them
- B then
- C they

9 Sequence the events by numbering the boxes with 1, 2 and 3.



3



2



1

10 Rewrite the sentence with correct capitalization, spelling, and punctuation.

Ellen likes to eat pizza

Ellen likes to eat pizza.

1 Mark the group of numbers that is in order from least to greatest.

- (A) 57 75 70
- (B) 75 70 57
- (C) 57 70 75**

2 10 more than 67 is 77.

10 less than 67 is 57.

$\begin{array}{r} 16 \\ - 3 \\ \hline 13 \end{array}$	$\begin{array}{r} 50 \\ + 20 \\ \hline 70 \end{array}$	$\begin{array}{r} 4 \\ + 9 \\ \hline 13 \end{array}$
-------------------------------------------------------	--------------------------------------------------------	------------------------------------------------------

4 Write how much money in all.



33¢

5 Use >, <, or = to fill in each circle.

$47 < 57$	$78 > 69$
$23 = 23$	$34 < 43$

6 Draw a line to match the words that rhyme.

seen	shop
tent	bent
top	mean

(Note: Lines connect 'seen' to 'bent', 'tent' to 'mean', and 'top' to 'shop'.)

7 Mark the group of words that is a complete sentence.

- (A) Look out for!
- (B) Out for the car!
- (C) Look out for the car!**

8 Mark the sight word that completes the sentence.

Charlie the golden ticket.

- (A) find
- (B) found**
- (C) have

9 What is the title of the book?




- (A) Summer Fun**
- (B) Nora Thomas

10 Rewrite the sentence with correct capitalization, spelling, and punctuation.
listen to your parents?

Listen to your parents.

- 1 What is the chance that you will pick a marble?



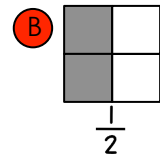
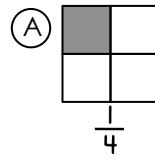
- (A) certain
(B) likely
(C) unlikely

- 2 Dinner starts at 6:00. It takes one hour. What time does dinner end?

- (A) 6:30 (B) 7:00 (C) 8:00

3 $8 + 3 = \underline{11}$ $10 - 6 = \underline{4}$

- 4 Which shaded fraction is more?



- 5 Ricky has 3 more rocks than Fumi. If Fumi has 10 rocks, how many rocks does Ricky have?

Answer: 13 rocks

- 6 Write two words that rhyme with the given word.

Answers will vary,
but may include:
mat, hat, pat, sat



cat

- 7 Mark the group of words that is a complete sentence.

- (A) Did you see the turtle?
(B) The turtle?
(C) You see the?

- 10 Rewrite the sentence with correct capitalization, spelling, and punctuation.
I play the piano every friday

I play the piano every Friday.

- 8 Mark the sight word that completes the sentence.

I will need to _____ about it.

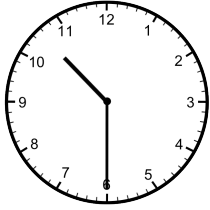
- (A) thank (B) think (C) then

- 9 Mark the correctly spelled word to complete the sentence.

Our team was in _____ place.


- (A) ferst (B) first (C) furst

1 Write the time.



10:30

2 Write the number of dots.



57 dots

3 $17 - 9 = 8$

$8 + 7 = 15$

Use the calendar to answer #4 and #5.

April

Sun	Mon	Tues	Wed	Thur	Fri	Sat
			1	2	3	4
5	6	7	8	9	10	11
12	13	14	15	16	17	18
19	20	21	22	23	24	25
26	27	28	29	30		

4 How many days are there in April?

30 days

5 What day is the first of the month?

Wednesday

6 Write two words that rhyme with the given word.

Answers will vary, but may include: car, star, far, bar, tar



jar

7 Mark the group of words that is a complete sentence.

- (A) Is reading a scary book.
- (B) A scary book.
- (C) Pat is reading a scary book.

8 Mark the sight word that completes the sentence.

The children ____ a spider at home.

- (A) saw
- (B) was
- (C) say

9 Mark the adjective that completes the sentence.

The dog has ____ fur.

- (A) hair
- (B) they
- (C) soft

10 Rewrite the sentence with correct capitalization, spelling, and punctuation.
Donna is going to california?

Donna is going to California.

1 Write how much money in all.



41¢

2 Travis has 13 stickers and Tessa has 7 stickers. How many more stickers does Travis have than Tessa?

Answer: 6 more stickers

$\begin{array}{r} 12 \\ - 8 \\ \hline 4 \end{array}$	$\begin{array}{r} 27 \\ + 4 \\ \hline 31 \end{array}$	$\begin{array}{r} 8 \\ + 6 \\ \hline 14 \end{array}$
------------------------------------------------------	-------------------------------------------------------	------------------------------------------------------

Use the graph to answer #4 and #5.

Favorite Sport						
	Tennis					
	Football					
	Soccer					

4 How many people chose soccer?

4 people

5 Which sport is the most popular?

football

Read the passage. Answer the questions.

Rabbit is fast and Turtle is slow. One day, Rabbit says to Turtle, "You will never beat me in a race!" Turtle doesn't think he can win, but he decides to try. During the race, Rabbit is so far ahead of Turtle, he decides to take a nap. While he is sleeping, Turtle slips past him and wins the race. Turtle is glad he didn't give up. Turtle can't wait for Rabbit to wake up!

6 How many characters are there?

- (A) one
 (B) two
 (C) three

7 Why doesn't Turtle think he'll win?

- (A) He is fast.
 (B) He is slow.
 (C) He doesn't know how to run.

8 What mistake does Rabbit make?

- (A) He falls asleep.
 (B) He trips and falls.
 (C) He lets Turtle win.

9 How do you know this story could not really happen?

- (A) Turtle and Rabbit are outside.
 (B) Rabbit falls asleep.
 (C) Rabbit and Turtle talk.


10 How will Rabbit mostly likely feel when he wakes up?

- (A) giggly
 (B) surprised
 (C) scared

1 About how long does it take to play a basketball game?

- (A) 1 minute (B) 1 hour (C) 1 day

2 Write the number of blocks as tens and ones.

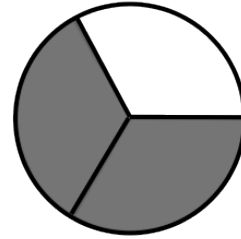


7 tens

0 ones

3 23 + 7 ----- 30	16 - 7 ----- 9	38 + 5 ----- 43
-------------------------------	-------------------------	--------------------------

4 Write the fraction for the shaded part of the shape.



2
3

5 Write the numbers in order from least to greatest.

64	46	55	47
46	47	55	64

6 Draw a line to match the two words to its contraction.

were not	I'm
I am	they're
they are	weren't

7 Find the group where the list of words belongs.

fall, winter, spring, summer

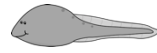


- (A) rain (B) weather (C) seasons

8 Mark the sight word that completes the sentence.

The birds _____ south in the winter.

- (A) flies (B) fly (C) walk

9 Sequence the events by numbering the boxes with 1, 2 and 3.

		
2	3	1

10 Rewrite the sentence with correct capitalization, spelling, and punctuation.
it is sunny at the beach

It is sunny at the beach.

1 Andy sees 6 black birds, 8 red birds, and 4 gray birds at the park. How many birds does he see in all?

Answer: 18 birds

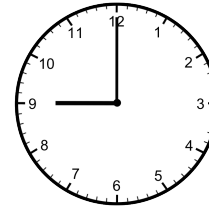
2 Find the pattern. Write the missing numbers.

50, 55, 60, 65, 70, 75, 80, 85

3 $4 + 7 + 6 =$ 17

$8 + 3 + 5 =$ 16

4 Write the time.



9:00

5 Write how much money in all.



35¢

6 Draw a line to match the two words to its contraction.

she is	won't
we have	she's
will not	we've

7 Find the group where the list of words belongs.

red, brown, white, yellow

- A colors
- B pens
- C food

8 Mark the sight word that completes the sentence.

When _____ we leaving for school?

- A is
- B will
- C are

9 Mark the sentence that is written with correct capitalization.

- A I'm going with jim to the park.
- B I'm going with Jim to the park.
- C I'm going with Jim to the Park.

10 Rewrite the sentence with correct capitalization, spelling, and punctuation.
andy clean his room.

Andy cleans his room.

1 Shade half of the rectangle below.



2 Find the pattern. Write the missing numbers.


82, 84, 86, 88, 90, 92, 94

$\begin{array}{r} 15 \\ - 9 \\ \hline 6 \end{array}$	$\begin{array}{r} 11 \\ - 7 \\ \hline 4 \end{array}$	$\begin{array}{r} 12 \\ + 4 \\ \hline 16 \end{array}$
------------------------------------------------------	------------------------------------------------------	-------------------------------------------------------

4 Write >, <, or = in the circle.

2 + 5 + 6 9 + 1 + 2

5 Mark the heavier object.



6 Read the sentence. Mark the contraction for the underlined words.

You are going with your father.

- (A) Your (B) Your'e (C) You're

7 Read the list of words. Mark the word that belongs with the list of words.

plane, truck, boat, train

- (A) car (B) shoes (C) house

8 Mark the sight word that completes the sentence.

___ many students are there?

- (A) Who (B) How (C) What

9 Mark the correctly spelled word to complete the sentence.

What ___ Evan need to do?

- (A) deos (B) does (C) dose

10 Rewrite the sentence with correct capitalization, spelling, and punctuation.
may I go with u?

May I go with you?

1 Draw an odd number of balloons.

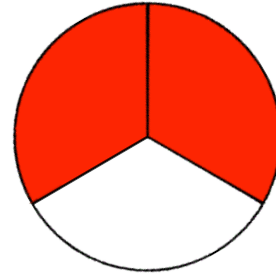
Answers will vary.

2 Missy has 1 dime and 3 nickels in her pocket. How much money does she have in all?

Answer: 25¢

$\begin{array}{r} 61 \\ - 8 \\ \hline 53 \end{array}$	$\begin{array}{r} 25 \\ - 7 \\ \hline 18 \end{array}$	$\begin{array}{r} 36 \\ + 5 \\ \hline 41 \end{array}$
-------------------------------------------------------	-------------------------------------------------------	-------------------------------------------------------

4 Shade $\frac{2}{3}$ of the circle.



5 Olivia picks 22 daisies and 16 roses from the garden. How many flowers does she pick in all?

Answer: 38 flowers

6 Read the sentence. Mark the contraction for the underlined words.

Do not touch the hot stove!

- A Don't B Do'nt C Dont'

7 Read the list of words. Mark the word that belongs with the list of words.

hat, sweater, jeans, boots

- A blanket B socks C juice

8 Mark the sight word that completes the sentence.

The ___ rabbit hops in the yard.

- A blue B little C very

9 Mark the adjective in the sentence.

The dinosaur has sharp teeth.

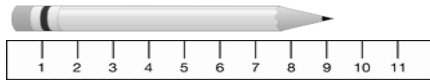
- A teeth B dinosaur C sharp

10 Rewrite the sentence with correct capitalization, spelling, and punctuation.

Jerry sleeps inn his tent

Jerry sleeps in his tent.

1 How many centimeters long is the pencil?



9 centimeters

2 Angie is 24, Blake is 32 and Brian is 23. Write their names from oldest to youngest.

Blake Angie Brian

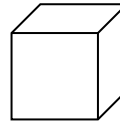
3	$\begin{array}{r} 34 \\ + 15 \\ \hline 49 \end{array}$	$\begin{array}{r} 52 \\ + 23 \\ \hline 75 \end{array}$	$\begin{array}{r} 20 \\ + 8 \\ \hline 28 \end{array}$
---	--------------------------------------------------------	--------------------------------------------------------	-------------------------------------------------------

4 Write how much money in all.



34¢

5 How many vertices does a cube have?



8 vertices

Read the passage. Answer the questions.

Hockey is Tough

Hockey is a game you play on an ice rink with a team. Hockey is a hard sport to play. You skate on the ice while trying to get a small black puck in the net using a special kind of stick. Hockey can be very dangerous if you are not careful. Players must wear a helmet and pads to protect their bodies.

- 6 What is the main idea?
- (A) why everyone should ice skate
 - (B) why hockey is the best sport
 - (C) why hockey is a hard sport**
- 7 What item don't you need to play?
- (A) skates
 - (B) a ball**
 - (C) a net

- 8 Why do players wear helmets?
- (A) to keep their hair in place
 - (B) to protect their heads**
 - (C) to see better

- 9 Why was this passage written?
- (A) to inform**
 - (B) to make people play hockey
 - (C) to make people laugh

- 10 What's another good title for this passage?
- (A) Hockey is for Everyone
 - (B) Hockey is a Sport
 - (C) Hockey is Challenging**